

- 39.1 The Principle of Galilean Relativity
- 39.2 The Michelson–Morley Experiment
- 39.3 Einstein's Principle of Relativity
- 39.4 Consequences of the Special Theory of Relativity
- 39.5 The Lorentz Transformation Equations
- 39.6 The Lorentz Velocity Transformation Equations
- 39.7 Relativistic Linear Momentum
- 39.8 Relativistic Energy
- 39.9 The General Theory of Relativity



Standing on the shoulders of a giant. David Serway, son of one of the authors, watches over two of his children, Nathan and Kaitlyn, as they frolic in the arms of Albert Einstein's statue at the Einstein memorial in Washington, D.C. It is well known that Einstein, the principal architect of relativity, was very fond of children. (*Emily Serway*)

Our everyday experiences and observations involve objects that move at speeds much less than the speed of light. Newtonian mechanics was formulated by observing and describing the motion of such objects, and this formalism is very successful in describing a wide range of phenomena that occur at low speeds. Nonetheless, it fails to describe properly the motion of objects whose speeds approach that of light.

Experimentally, the predictions of Newtonian theory can be tested at high speeds by accelerating electrons or other charged particles through a large electric potential difference. For example, it is possible to accelerate an electron to a speed of $0.99c$ (where c is the speed of light) by using a potential difference of several million volts. According to Newtonian mechanics, if the potential difference is increased by a factor of 4, the electron's kinetic energy is four times greater and its speed should double to $1.98c$. Experiments show, however, that the speed of the electron—as well as the speed of any other object in the Universe—always remains less than the speed of light, regardless of the size of the accelerating voltage. Because it places no upper limit on speed, Newtonian mechanics is contrary to modern experimental results and is clearly a limited theory.

In 1905, at the age of only 26, Einstein published his special theory of relativity. Regarding the theory, Einstein wrote:

The relativity theory arose from necessity, from serious and deep contradictions in the old theory from which there seemed no escape. The strength of the new theory lies in the consistency and simplicity with which it solves all these difficulties.¹

Although Einstein made many other important contributions to science, the special theory of relativity alone represents one of the greatest intellectual achievements of all time. With this theory, experimental observations can be correctly predicted over the range of speeds from $v = 0$ to speeds approaching the speed of light. At low speeds, Einstein's theory reduces to Newtonian mechanics as a limiting situation. It is important to recognize that Einstein was working on electromagnetism when he developed the special theory of relativity. He was convinced that Maxwell's equations were correct, and to reconcile them with one of his postulates, he was forced into the revolutionary notion of assuming that space and time are not absolute.

This chapter gives an introduction to the special theory of relativity, with emphasis on some of its predictions. In addition to its well-known and essential role in theoretical physics, the special theory of relativity has practical applications, including the design of nuclear power plants and modern global positioning system (GPS) units. These devices depend on relativistic principles for proper design and operation.

39.1 The Principle of Galilean Relativity

To describe a physical event, we must establish a frame of reference. You should recall from Chapter 5 that an inertial frame of reference is one in which an object is observed to have no acceleration when no forces act on it. Furthermore, any frame moving with constant velocity with respect to an inertial frame must also be an inertial frame.

There is no absolute inertial reference frame. Therefore, the results of an experiment performed in a vehicle moving with uniform velocity must be identical to the results of the same experiment performed in a stationary vehicle. The formal statement of this result is called the **principle of Galilean relativity**:

The laws of mechanics must be the same in all inertial frames of reference.

◀ Principle of Galilean relativity

Let's consider an observation that illustrates the equivalence of the laws of mechanics in different inertial frames. The pickup truck in Figure 39.1a moves with a

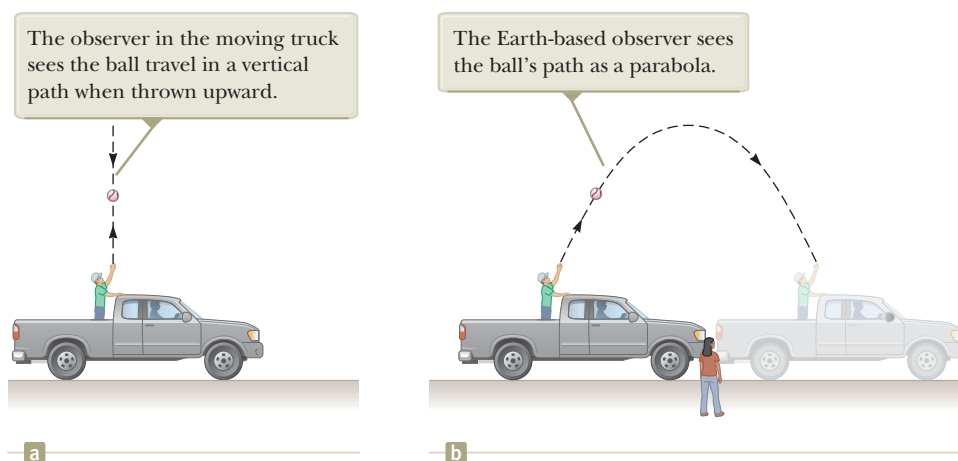


Figure 39.1 Two observers watch the path of a thrown ball and obtain different results.

¹A. Einstein and L. Infeld, *The Evolution of Physics* (New York: Simon and Schuster, 1961).

constant velocity with respect to the ground. If a passenger in the truck throws a ball straight up and if air resistance is neglected, the passenger observes that the ball moves in a vertical path. The motion of the ball appears to be precisely the same as if the ball were thrown by a person at rest on the Earth. The law of universal gravitation and the equations of motion under constant acceleration are obeyed whether the truck is at rest or in uniform motion.

Consider also an observer on the ground as in Figure 39.1b. Both observers agree on the laws of physics: the observer in the truck throws a ball straight up, and it rises and falls back into his hand according to the particle under constant acceleration model. Do the observers agree on the path of the ball thrown by the observer in the truck? The observer on the ground sees the path of the ball as a parabola as illustrated in Figure 39.1b, whereas, as mentioned earlier, the observer in the truck sees the ball move in a vertical path. Furthermore, according to the observer on the ground, the ball has a horizontal component of velocity equal to the velocity of the truck, and the horizontal motion of the ball is described by the particle under constant velocity model. Although the two observers disagree on certain aspects of the situation, they agree on the validity of Newton's laws and on the results of applying appropriate analysis models that we have learned. This agreement implies that no mechanical experiment can detect any difference between the two inertial frames. The only thing that can be detected is the relative motion of one frame with respect to the other.

Quick Quiz 39.1 Which observer in Figure 39.1 sees the ball's *correct* path? (a) the observer in the truck (b) the observer on the ground (c) both observers

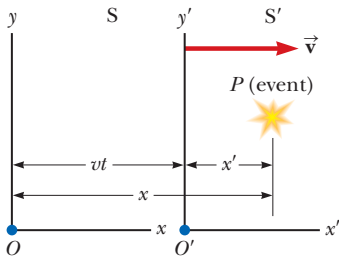


Figure 39.2 An event occurs at a point P . The event is seen by two observers in inertial frames S and S' , where S' moves with a velocity \vec{v} relative to S .

Suppose some physical phenomenon, which we call an *event*, occurs and is observed by an observer at rest in an inertial reference frame. The wording “in a frame” means that the observer is at rest with respect to the origin of that frame. The event's location and time of occurrence can be specified by the four coordinates (x, y, z, t) . We would like to be able to transform these coordinates from those of an observer in one inertial frame to those of another observer in a frame moving with uniform relative velocity compared with the first frame.

Consider two inertial frames S and S' (Fig. 39.2). The S' frame moves with a constant velocity \vec{v} along the common x and x' axes, where \vec{v} is measured relative to S . We assume the origins of S and S' coincide at $t = 0$ and an event occurs at point P in space at some instant of time. For simplicity, we show the observer O in the S frame and the observer O' in the S' frame as blue dots at the origins of their coordinate frames in Figure 39.2, but that is not necessary: either observer could be at any fixed location in his or her frame. Observer O describes the event with space–time coordinates (x, y, z, t) , whereas observer O' in S' uses the coordinates (x', y', z', t') to describe the same event. Model the origin of S' as a particle under constant velocity relative to the origin of S . As we see from the geometry in Figure 39.2, the relationships among these various coordinates can be written

$$x' = x - vt \quad y' = y \quad z' = z \quad t' = t \quad (39.1)$$

These equations are the **Galilean space–time transformation equations**. Note that time is assumed to be the same in both inertial frames. That is, within the framework of classical mechanics, all clocks run at the same rate, regardless of their velocity, so the time at which an event occurs for an observer in S is the same as the time for the same event in S' . Consequently, the time interval between two successive events should be the same for both observers. Although this assumption may seem obvious, it turns out to be incorrect in situations where v is comparable to the speed of light.

Now suppose a particle moves through a displacement of magnitude dx along the x axis in a time interval dt as measured by an observer in S . It follows from Equations 39.1 that the corresponding displacement dx' measured by an observer in S' is

Galilean transformation equations ▶

$dx' = dx - v dt$, where frame S' is moving with speed v in the x direction relative to frame S . Because $dt = dt'$, we find that

$$\frac{dx'}{dt'} = \frac{dx}{dt} - v$$

or

$$u'_x = u_x - v \quad (39.2)$$

where u_x and u'_x are the x components of the velocity of the particle measured by observers in S and S' , respectively. (We use the symbol \vec{u} rather than \vec{v} for particle velocity because \vec{v} is already used for the relative velocity of two reference frames.) Equation 39.2 is the **Galilean velocity transformation equation**. It is consistent with our intuitive notion of time and space as well as with our discussions in Section 4.6. As we shall soon see, however, it leads to serious contradictions when applied to electromagnetic waves.

Quick Quiz 39.2 A baseball pitcher with a 90-mi/h fastball throws a ball while standing on a railroad flatcar moving at 110 mi/h. The ball is thrown in the same direction as that of the velocity of the train. If you apply the Galilean velocity transformation equation to this situation, is the speed of the ball relative to the Earth (a) 90 mi/h, (b) 110 mi/h, (c) 20 mi/h, (d) 200 mi/h, or (e) impossible to determine?

The Speed of Light

It is quite natural to ask whether the principle of Galilean relativity also applies to electricity, magnetism, and optics. Experiments indicate that the answer is no. Recall from Chapter 34 that Maxwell showed that the speed of light in free space is $c = 3.00 \times 10^8$ m/s. Physicists of the late 1800s thought light waves move through a medium called the *ether* and the speed of light is c only in a special, absolute frame at rest with respect to the ether. The Galilean velocity transformation equation was expected to hold for observations of light made by an observer in any frame moving at speed v relative to the absolute ether frame. That is, if light travels along the x axis and an observer moves with velocity \vec{v} along the x axis, the observer measures the light to have speed $c \pm v$, depending on the directions of travel of the observer and the light.

Because the existence of a preferred, absolute ether frame would show that light is similar to other classical waves and that Newtonian ideas of an absolute frame are true, considerable importance was attached to establishing the existence of the ether frame. Prior to the late 1800s, experiments involving light traveling in media moving at the highest laboratory speeds attainable at that time were not capable of detecting differences as small as that between c and $c \pm v$. Starting in about 1880, scientists decided to use the Earth as the moving frame in an attempt to improve their chances of detecting these small changes in the speed of light.

Observers fixed on the Earth can take the view that they are stationary and that the absolute ether frame containing the medium for light propagation moves past them with speed v . Determining the speed of light under these circumstances is similar to determining the speed of an aircraft traveling in a moving air current, or wind; consequently, we speak of an “ether wind” blowing through our apparatus fixed to the Earth.

A direct method for detecting an ether wind would use an apparatus fixed to the Earth to measure the ether wind’s influence on the speed of light. If v is the speed of the ether relative to the Earth, light should have its maximum speed $c + v$ when propagating downwind as in Figure 39.3a. Likewise, the speed of light should have its minimum value $c - v$ when the light is propagating upwind as in Figure 39.3b and an intermediate value $(c^2 - v^2)^{1/2}$ when the light is directed such that it travels perpendicular to the ether wind as in Figure 39.3c. In this latter case, the vector \vec{c}

Pitfall Prevention 39.1

The Relationship Between the S and S' Frames Many of the mathematical representations in this chapter are true *only* for the specified relationship between the S and S' frames. The x and x' axes coincide, except their origins are different. The y and y' axes (and the z and z' axes) are parallel, but they only coincide at one instant due to the time-varying position of the origin of S' with respect to that of S . We choose the time $t = 0$ to be the instant at which the origins of the two coordinate systems coincide. If the S' frame is moving in the positive x direction relative to S , then v is positive; otherwise, it is negative.

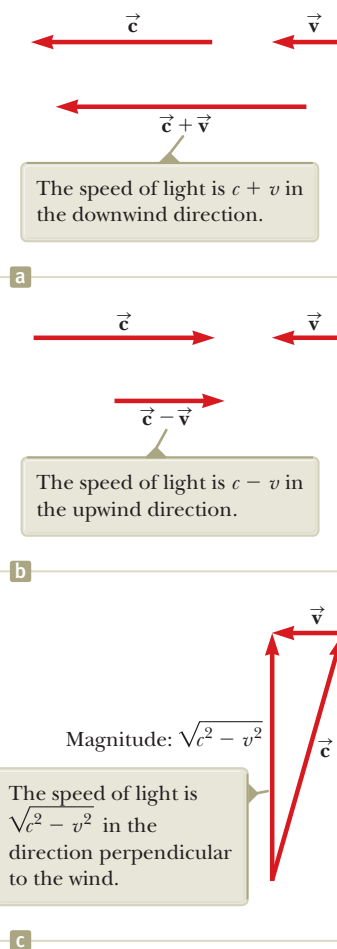


Figure 39.3 If the velocity of the ether wind relative to the Earth is \vec{v} and the velocity of light relative to the ether is \vec{c} , the speed of light relative to the Earth depends on the direction of the Earth’s velocity.

must be aimed upstream so that the resultant velocity is perpendicular to the wind, like the boat in Figure 4.21b. If the Sun is assumed to be at rest in the ether, the velocity of the ether wind would be equal to the orbital velocity of the Earth around the Sun, which has a magnitude of approximately 30 km/s or 3×10^4 m/s. Because $c = 3 \times 10^8$ m/s, it is necessary to detect a change in speed of approximately 1 part in 10^4 for measurements in the upwind or downwind directions. Although such a change is experimentally measurable, all attempts to detect such changes and establish the existence of the ether wind (and hence the absolute frame) proved futile! We shall discuss the classic experimental search for the ether in Section 39.2.

The principle of Galilean relativity refers only to the laws of mechanics. If it is assumed the laws of electricity and magnetism are the same in all inertial frames, a paradox concerning the speed of light immediately arises. That can be understood by recognizing that Maxwell's equations imply that the speed of light always has the fixed value 3.00×10^8 m/s in all inertial frames, a result in direct contradiction to what is expected based on the Galilean velocity transformation equation. According to Galilean relativity, the speed of light should *not* be the same in all inertial frames.

To resolve this contradiction in theories, we must conclude that either (1) the laws of electricity and magnetism are not the same in all inertial frames or (2) the Galilean velocity transformation equation is incorrect. If we assume the first alternative, a preferred reference frame in which the speed of light has the value c must exist and the measured speed must be greater or less than this value in any other reference frame, in accordance with the Galilean velocity transformation equation. If we assume the second alternative, we must abandon the notions of absolute time and absolute length that form the basis of the Galilean space–time transformation equations.

39.2 The Michelson–Morley Experiment

The most famous experiment designed to detect small changes in the speed of light was first performed in 1881 by A. A. Michelson (see Section 37.6) and later repeated under various conditions by Michelson and Edward W. Morley (1838–1923). As we shall see, the outcome of the experiment contradicted the ether hypothesis.

The experiment was designed to determine the velocity of the Earth relative to that of the hypothetical ether. The experimental tool used was the Michelson interferometer, which was discussed in Section 37.6 and is shown again in Figure 39.4. Arm 2 is aligned along the direction of the Earth's motion through space. The Earth moving through the ether at speed v is equivalent to the ether flowing past the Earth in the opposite direction with speed v . This ether wind blowing in the direction opposite the direction of the Earth's motion should cause the speed of light measured in the Earth frame to be $c - v$ as the light approaches mirror M_2 and $c + v$ after reflection, where c is the speed of light in the ether frame.

The two light beams reflect from M_1 and M_2 and recombine, and an interference pattern is formed as discussed in Section 37.6. The interference pattern is then observed while the interferometer is rotated through an angle of 90° . This rotation interchanges the speed of the ether wind between the arms of the interferometer. The rotation should cause the fringe pattern to shift slightly but measurably. Measurements failed, however, to show any change in the interference pattern! The Michelson–Morley experiment was repeated at different times of the year when the ether wind was expected to change direction and magnitude, but the results were always the same: no fringe shift of the magnitude required was *ever* observed.²

The negative results of the Michelson–Morley experiment not only contradicted the ether hypothesis, but also showed that it is impossible to measure the absolute

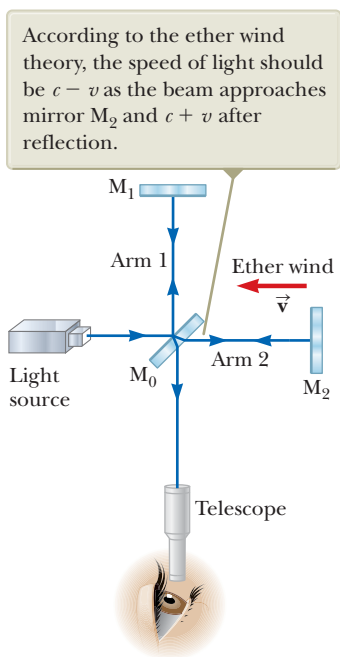


Figure 39.4 A Michelson interferometer is used in an attempt to detect the ether wind.

²From an Earth-based observer's point of view, changes in the Earth's speed and direction of motion in the course of a year are viewed as ether wind shifts. Even if the speed of the Earth with respect to the ether were zero at some time, six months later the speed of the Earth would be 60 km/s with respect to the ether and as a result a fringe shift should be noticed. No shift has ever been observed, however.

velocity of the Earth with respect to the ether frame. Einstein, however, offered a postulate for his special theory of relativity that places quite a different interpretation on these null results. In later years, when more was known about the nature of light, the idea of an ether that permeates all of space was abandoned. Light is now understood to be an electromagnetic wave, which requires no medium for its propagation. As a result, the idea of an ether in which these waves travel became unnecessary.

Details of the Michelson–Morley Experiment

To understand the outcome of the Michelson–Morley experiment, let's assume the two arms of the interferometer in Figure 39.4 are of equal length L . We shall analyze the situation as if there were an ether wind because that is what Michelson and Morley expected to find. As noted above, the speed of the light beam along arm 2 should be $c - v$ as the beam approaches M_2 and $c + v$ after the beam is reflected. We model a pulse of light as a particle under constant speed. Therefore, the time interval for travel to the right for the pulse is $\Delta t = L/(c - v)$ and the time interval for travel to the left is $\Delta t = L/(c + v)$. The total time interval for the round trip along arm 2 is

$$\Delta t_{\text{arm 2}} = \frac{L}{c + v} + \frac{L}{c - v} = \frac{2Lc}{c^2 - v^2} = \frac{2L}{c} \left(1 - \frac{v^2}{c^2}\right)^{-1}$$

Now consider the light beam traveling along arm 1, perpendicular to the ether wind. Because the speed of the beam relative to the Earth is $(c^2 - v^2)^{1/2}$ in this case (see Fig. 39.3c), the time interval for travel for each half of the trip is $\Delta t = L/(c^2 - v^2)^{1/2}$ and the total time interval for the round trip is

$$\Delta t_{\text{arm 1}} = \frac{2L}{(c^2 - v^2)^{1/2}} = \frac{2L}{c} \left(1 - \frac{v^2}{c^2}\right)^{-1/2}$$

The time difference Δt between the horizontal round trip (arm 2) and the vertical round trip (arm 1) is

$$\Delta t = \Delta t_{\text{arm 2}} - \Delta t_{\text{arm 1}} = \frac{2L}{c} \left[\left(1 - \frac{v^2}{c^2}\right)^{-1} - \left(1 - \frac{v^2}{c^2}\right)^{-1/2} \right]$$

Because $v^2/c^2 \ll 1$, we can simplify this expression by using the following binomial expansion after dropping all terms higher than second order:

$$(1 - x)^n \approx 1 - nx \quad (\text{for } x \ll 1)$$

In our case, $x = v^2/c^2$, and we find that

$$\Delta t = \Delta t_{\text{arm 2}} - \Delta t_{\text{arm 1}} \approx \frac{Lv^2}{c^3} \quad (39.3)$$

This time difference between the two instants at which the reflected beams arrive at the viewing telescope gives rise to a phase difference between the beams, producing an interference pattern when they combine at the position of the telescope. A shift in the interference pattern should be detected when the interferometer is rotated through 90° in a horizontal plane so that the two beams exchange roles. This rotation results in a time difference twice that given by Equation 39.3. Therefore, the path difference that corresponds to this time difference is

$$\Delta d = c(2\Delta t) = \frac{2Lv^2}{c^2}$$

Because a change in path length of one wavelength corresponds to a shift of one fringe, the corresponding fringe shift is equal to this path difference divided by the wavelength of the light:


$$\text{Shift} = \frac{2Lv^2}{\lambda c^2} \quad (39.4)$$

In the experiments by Michelson and Morley, each light beam was reflected by mirrors many times to give an effective path length L of approximately 11 m. Using this value, taking v to be equal to 3.0×10^4 m/s (the speed of the Earth around the Sun), and using 500 nm for the wavelength of the light, we expect a fringe shift of

$$\text{Shift} = \frac{2(11 \text{ m})(3.0 \times 10^4 \text{ m/s})^2}{(5.0 \times 10^{-7} \text{ m})(3.0 \times 10^8 \text{ m/s})^2} = 0.44$$

The instrument used by Michelson and Morley could detect shifts as small as 0.01 fringe, but it detected no shift whatsoever in the fringe pattern! The experiment has been repeated many times since by different scientists under a wide variety of conditions, and no fringe shift has ever been detected. Therefore, it was concluded that the motion of the Earth with respect to the postulated ether cannot be detected.

Many efforts were made to explain the null results of the Michelson–Morley experiment and to save the ether frame concept and the Galilean velocity transformation equation for light. All proposals resulting from these efforts have been shown to be wrong. No experiment in the history of physics received such valiant efforts to explain the absence of an expected result as did the Michelson–Morley experiment. The stage was set for Einstein, who solved the problem in 1905 with his special theory of relativity.



© Mary Evans Picture Library/Alamy

Albert Einstein

*German–American Physicist
(1879–1955)*

Einstein, one of the greatest physicists of all time, was born in Ulm, Germany. In 1905, at age 26, he published four scientific papers that revolutionized physics. Two of these papers were concerned with what is now considered his most important contribution: the special theory of relativity.

In 1916, Einstein published his work on the general theory of relativity. The most dramatic prediction of this theory is the degree to which light is deflected by a gravitational field. Measurements made by astronomers on bright stars in the vicinity of the eclipsed Sun in 1919 confirmed Einstein's prediction, and Einstein became a world celebrity as a result. Einstein was deeply disturbed by the development of quantum mechanics in the 1920s despite his own role as a scientific revolutionary. In particular, he could never accept the probabilistic view of events in nature that is a central feature of quantum theory. The last few decades of his life were devoted to an unsuccessful search for a unified theory that would combine gravitation and electromagnetism.

39.3 Einstein's Principle of Relativity

In the previous section, we noted the impossibility of measuring the speed of the ether with respect to the Earth and the failure of the Galilean velocity transformation equation in the case of light. Einstein proposed a theory that boldly removed these difficulties and at the same time completely altered our notion of space and time.³ He based his special theory of relativity on two postulates:

- 1. The principle of relativity:** The laws of physics must be the same in all inertial reference frames.
- 2. The constancy of the speed of light:** The speed of light in vacuum has the same value, $c = 3.00 \times 10^8$ m/s, in all inertial frames, regardless of the velocity of the observer or the velocity of the source emitting the light.

The first postulate asserts that *all* the laws of physics—those dealing with mechanics, electricity and magnetism, optics, thermodynamics, and so on—are the same in all reference frames moving with constant velocity relative to one another. This postulate is a generalization of the principle of Galilean relativity, which refers only to the laws of mechanics. From an experimental point of view, Einstein's principle of relativity means that any kind of experiment (measuring the speed of light, for example) performed in a laboratory at rest must give the same result when performed in a laboratory moving at a constant velocity with respect to the first one. Hence, no preferred inertial reference frame exists, and it is impossible to detect absolute motion.

Note that postulate 2 is required by postulate 1: if the speed of light were not the same in all inertial frames, measurements of different speeds would make it possible to distinguish between inertial frames. As a result, a preferred, absolute frame could be identified, in contradiction to postulate 1.

Although the Michelson–Morley experiment was performed before Einstein published his work on relativity, it is not clear whether or not Einstein was aware of the details of the experiment. Nonetheless, the null result of the experiment can be readily understood within the framework of Einstein's theory. According to

³A. Einstein, "On the Electrodynamics of Moving Bodies," *Ann. Physik* 17:891, 1905. For an English translation of this article and other publications by Einstein, see the book by H. Lorentz, A. Einstein, H. Minkowski, and H. Weyl, *The Principle of Relativity* (New York: Dover, 1958).

his principle of relativity, the premises of the Michelson–Morley experiment were incorrect. In the process of trying to explain the expected results, we stated that when light traveled against the ether wind, its speed was $c - v$, in accordance with the Galilean velocity transformation equation. If the state of motion of the observer or of the source has no influence on the value found for the speed of light, however, one always measures the value to be c . Likewise, the light makes the return trip after reflection from the mirror at speed c , not at speed $c + v$. Therefore, the motion of the Earth does not influence the interference pattern observed in the Michelson–Morley experiment, and a null result should be expected.

If we accept Einstein's theory of relativity, we must conclude that relative motion is unimportant when measuring the speed of light. At the same time, we must alter our commonsense notion of space and time and be prepared for some surprising consequences. As you read the pages ahead, keep in mind that our commonsense ideas are based on a lifetime of everyday experiences and not on observations of objects moving at hundreds of thousands of kilometers per second. Therefore, these results may seem strange, but that is only because we have no experience with them.

39.4 Consequences of the Special Theory of Relativity

As we examine some of the consequences of relativity in this section, we restrict our discussion to the concepts of simultaneity, time intervals, and lengths, all three of which are quite different in relativistic mechanics from what they are in Newtonian mechanics. In relativistic mechanics, for example, the distance between two points and the time interval between two events depend on the frame of reference in which they are measured.

Simultaneity and the Relativity of Time

A basic premise of Newtonian mechanics is that a universal time scale exists that is the same for all observers. Newton and his followers took simultaneity for granted. In his special theory of relativity, Einstein abandoned this assumption.

Einstein devised the following thought experiment to illustrate this point. A boxcar moves with uniform velocity, and two bolts of lightning strike its ends as illustrated in Figure 39.5a, leaving marks on the boxcar and on the ground. The marks on the boxcar are labeled A' and B' , and those on the ground are labeled A and B . An observer O' moving with the boxcar is midway between A' and B' , and a ground observer O is midway between A and B . The events recorded by the observers are the striking of the boxcar by the two lightning bolts.

The light signals emitted from A and B at the instant at which the two bolts strike later reach observer O at the same time as indicated in Figure 39.5b. This observer

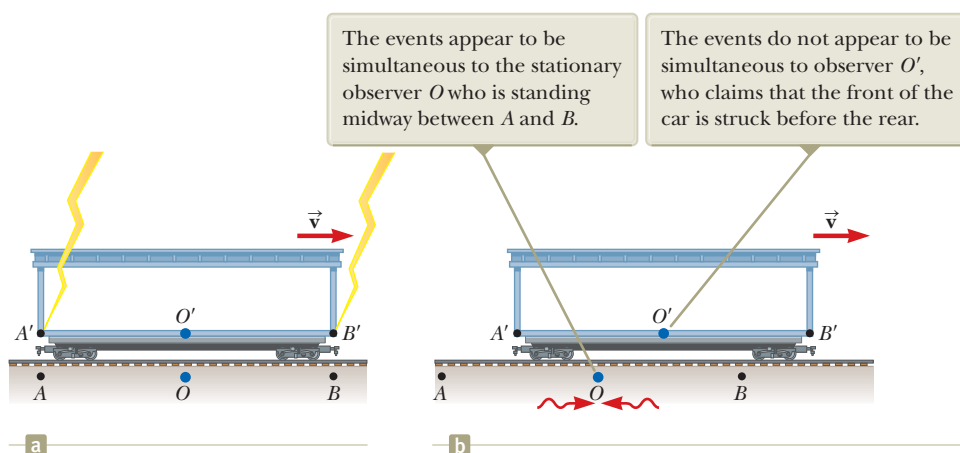


Figure 39.5 (a) Two lightning bolts strike the ends of a moving boxcar. (b) The leftward-traveling light signal has already passed O' , but the rightward-traveling signal has not yet reached O' .

Pitfall Prevention 39.2

Who's Right? You might wonder which observer in Figure 39.5 is correct concerning the two lightning strikes. *Both are correct* because the principle of relativity states that *there is no preferred inertial frame of reference*. Although the two observers reach different conclusions, both are correct in their own reference frame because the concept of simultaneity is not absolute. That, in fact, is the central point of relativity: any uniformly moving frame of reference can be used to describe events and do physics.

realizes that the signals traveled at the same speed over equal distances and so concludes that the events at A and B occurred simultaneously. Now consider the same events as viewed by observer O' . By the time the signals have reached observer O , observer O' has moved as indicated in Figure 39.5b. Therefore, the signal from B' has already swept past O' , but the signal from A' has not yet reached O' . In other words, O' sees the signal from B' before seeing the signal from A' . According to Einstein, *the two observers must find that light travels at the same speed*. Therefore, observer O' concludes that one lightning bolt strikes the front of the boxcar *before* the other one strikes the back.

This thought experiment clearly demonstrates that the two events that appear to be simultaneous to observer O do *not* appear to be simultaneous to observer O' . Simultaneity is not an absolute concept but rather one that depends on the state of motion of the observer. Einstein's thought experiment demonstrates that two observers can disagree on the simultaneity of two events. This disagreement, however, depends on the transit time of light to the observers and therefore does *not* demonstrate the deeper meaning of relativity. In relativistic analyses of high-speed situations, simultaneity is relative even when the transit time is subtracted out. In fact, in all the relativistic effects we discuss, we ignore differences caused by the transit time of light to the observers.

Time Dilation

To illustrate that observers in different inertial frames can measure different time intervals between a pair of events, consider a vehicle moving to the right with a speed v such as the boxcar shown in Figure 39.6a. A mirror is fixed to the ceiling of the vehicle, and observer O' at rest in the frame attached to the vehicle holds a flashlight a distance d below the mirror. At some instant, the flashlight emits a pulse of light directed toward the mirror (event 1), and at some later time after reflecting from the mirror, the pulse arrives back at the flashlight (event 2). Observer O' carries a clock and uses it to measure the time interval Δt_p between these two events. (The subscript p stands for *proper*, as we shall see in a moment.) We model the pulse of light as a particle under constant speed. Because the light pulse has a speed c , the time interval required for the pulse to travel from O' to the mirror and back is

$$\Delta t_p = \frac{\text{distance traveled}}{\text{speed}} = \frac{2d}{c} \quad (39.5)$$

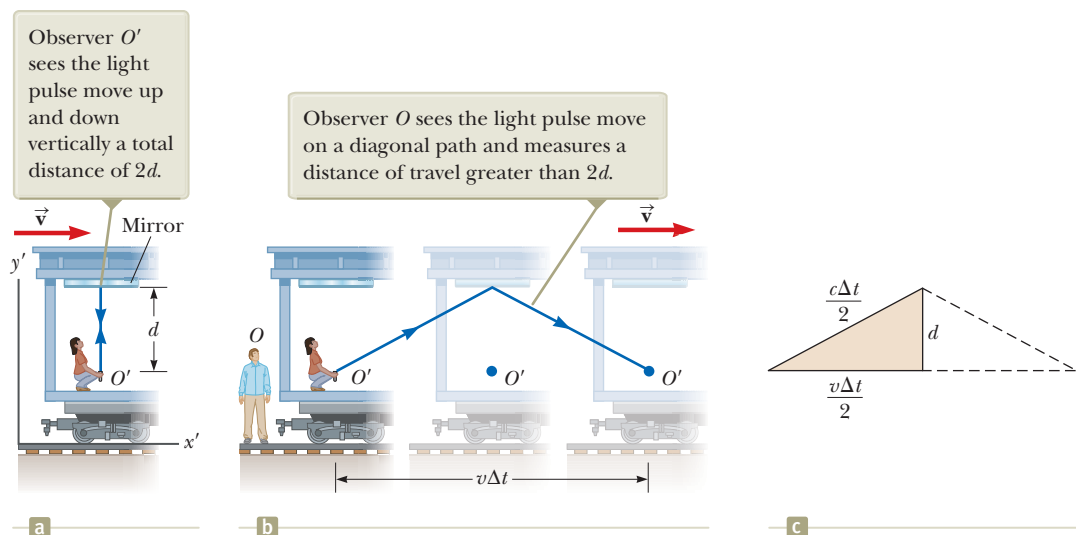


Figure 39.6 (a) A mirror is fixed to a moving vehicle, and a light pulse is sent out by observer O' at rest in the vehicle. (b) Relative to a stationary observer O standing alongside the vehicle, the mirror and O' move with a speed v . (c) The right triangle for calculating the relationship between Δt and Δt_p .

Now consider the same pair of events as viewed by observer O in a second frame at rest with respect to the ground as shown in Figure 39.6b. According to this observer, the mirror and the flashlight are moving to the right with a speed v , and as a result, the sequence of events appears entirely different. By the time the light from the flashlight reaches the mirror, the mirror has moved to the right a distance $v \Delta t/2$, where Δt is the time interval required for the light to travel from O' to the mirror and back to O' as measured by O . Observer O concludes that because of the motion of the vehicle, if the light is to hit the mirror, it must leave the flashlight at an angle with respect to the vertical direction. Comparing Figure 39.6a with Figure 39.6b, we see that the light must travel farther in part (b) than in part (a). (Notice that neither observer “knows” that he or she is moving. Each is at rest in his or her own inertial frame.)

According to the second postulate of the special theory of relativity, both observers must measure c for the speed of light. Because the light travels farther according to O , the time interval Δt measured by O is longer than the time interval Δt_p measured by O' . To obtain a relationship between these two time intervals, let's use the right triangle shown in Figure 39.6c. The Pythagorean theorem gives

$$\left(\frac{c \Delta t}{2}\right)^2 = \left(\frac{v \Delta t}{2}\right)^2 + d^2$$

Solving for Δt gives

$$\Delta t = \frac{2d}{\sqrt{c^2 - v^2}} = \frac{2d}{c \sqrt{1 - \frac{v^2}{c^2}}} \tag{39.6}$$

Because $\Delta t_p = 2d/c$, we can express this result as

$$\Delta t = \frac{\Delta t_p}{\sqrt{1 - \frac{v^2}{c^2}}} = \gamma \Delta t_p \tag{39.7}$$

◀ Time dilation

where

$$\gamma = \frac{1}{\sqrt{1 - \frac{v^2}{c^2}}} \tag{39.8}$$

Because γ is always greater than unity, Equation 39.7 shows that the time interval Δt measured by an observer moving with respect to a clock is longer than the time interval Δt_p measured by an observer at rest with respect to the clock. This effect is known as **time dilation**.

Time dilation is not observed in our everyday lives, which can be understood by considering the factor γ . This factor deviates significantly from a value of 1 only for very high speeds as shown in Figure 39.7 and Table 39.1. For example, for a speed of $0.1c$, the value of γ is 1.005. Therefore, there is a time dilation of only 0.5% at

Table 39.1 Approximate Values for γ at Various Speeds

v/c	γ
0	1
0.001 0	1.000 000 5
0.010	1.000 05
0.10	1.005
0.20	1.021
0.30	1.048
0.40	1.091
0.50	1.155
0.60	1.250
0.70	1.400
0.80	1.667
0.90	2.294
0.92	2.552
0.94	2.931
0.96	3.571
0.98	5.025
0.99	7.089
0.995	10.01
0.999	22.37

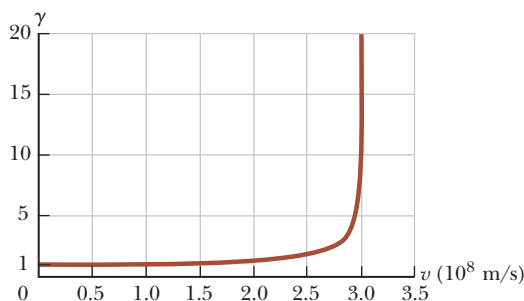


Figure 39.7 Graph of γ versus v . As the speed approaches that of light, γ increases rapidly.

one-tenth the speed of light. Speeds encountered on an everyday basis are far slower than $0.1c$, so we do not experience time dilation in normal situations.

The time interval Δt_p in Equations 39.5 and 39.7 is called the **proper time interval**. (Einstein used the German term *Eigenzeit*, which means “own-time.”) In general, the proper time interval is the time interval between two events measured by an observer *who sees the events occur at the same point in space*.

If a clock is moving with respect to you, the time interval between ticks of the moving clock is observed to be longer than the time interval between ticks of an identical clock in your reference frame. Therefore, it is often said that a moving clock is measured to run more slowly than a clock in your reference frame by a factor γ . We can generalize this result by stating that all physical processes, including mechanical, chemical, and biological ones, are measured to slow down when those processes occur in a frame moving with respect to the observer. For example, the heartbeat of an astronaut moving through space keeps time with a clock inside the spacecraft. Both the astronaut’s clock and heartbeat are measured to slow down relative to a clock back on the Earth (although the astronaut would have no sensation of life slowing down in the spacecraft).

Quick Quiz 39.3 Suppose the observer O' on the train in Figure 39.6 aims her flashlight at the far wall of the boxcar and turns it on and off, sending a pulse of light toward the far wall. Both O' and O measure the time interval between when the pulse leaves the flashlight and when it hits the far wall. Which observer measures the proper time interval between these two events? (a) O' (b) O (c) both observers (d) neither observer

Quick Quiz 39.4 A crew on a spacecraft watches a movie that is two hours long. The spacecraft is moving at high speed through space. Does an Earth-based observer watching the movie screen on the spacecraft through a powerful telescope measure the duration of the movie to be (a) longer than, (b) shorter than, or (c) equal to two hours?

Pitfall Prevention 39.3

The Proper Time Interval It is very important in relativistic calculations to correctly identify the observer who measures the proper time interval. The proper time interval between two events is always the time interval measured by an observer for whom the two events take place at the same position.

Time dilation is a very real phenomenon that has been verified by various experiments involving natural clocks. One experiment reported by J. C. Hafele and R. E. Keating provided direct evidence of time dilation.⁴ Time intervals measured with four cesium atomic clocks in jet flight were compared with time intervals measured by Earth-based reference atomic clocks. To compare these results with theory, many factors had to be considered, including periods of speeding up and slowing down relative to the Earth, variations in direction of travel, and the weaker gravitational field experienced by the flying clocks than that experienced by the Earth-based clock. The results were in good agreement with the predictions of the special theory of relativity and were explained in terms of the relative motion between the Earth and the jet aircraft. In their paper, Hafele and Keating stated that “relative to the atomic time scale of the U.S. Naval Observatory, the flying clocks lost 59 ± 10 ns during the eastward trip and gained 273 ± 7 ns during the westward trip.”

Another interesting example of time dilation involves the observation of *muons*, unstable elementary particles that have a charge equal to that of the electron and a mass 207 times that of the electron. Muons can be produced by the collision of cosmic radiation with atoms high in the atmosphere. Slow-moving muons in the laboratory have a lifetime that is measured to be the proper time interval $\Delta t_p = 2.2 \mu\text{s}$. If we take $2.2 \mu\text{s}$ as the average lifetime of a muon and assume that muons created by cosmic radiation have a speed close to the speed of light, we find that these particles can travel a distance of approximately $(3.0 \times 10^8 \text{ m/s})(2.2 \times 10^{-6} \text{ s}) \approx 6.6 \times 10^2 \text{ m}$ before they decay (Fig. 39.8a). Hence, they are unlikely to reach the

⁴J. C. Hafele and R. E. Keating, “Around the World Atomic Clocks: Relativistic Time Gains Observed,” *Science* **177**:168, 1972.

Without relativistic considerations, according to an observer on the Earth, muons created in the atmosphere and traveling downward with a speed close to c travel only about 6.6×10^2 m before decaying with an average lifetime of $2.2 \mu\text{s}$. Therefore, very few muons would reach the surface of the Earth.

Muon is created
 $\approx 6.6 \times 10^2$ m
 Muon decays



a

With relativistic considerations, the muon's lifetime is dilated according to an observer on the Earth. Hence, according to this observer, the muon can travel about 4.8×10^3 m before decaying. The result is many of them arriving at the surface.

Muon is created

$\approx 4.8 \times 10^3$ m

Muon decays



b

Figure 39.8 Travel of muons according to an Earth-based observer.

surface of the Earth from high in the atmosphere where they are produced. Experiments show, however, that a large number of muons *do* reach the surface. The phenomenon of time dilation explains this effect. As measured by an observer on the Earth, the muons have a dilated lifetime equal to $\gamma \Delta t_p$. For example, for $v = 0.99c$, $\gamma \approx 7.1$, and $\gamma \Delta t_p \approx 16 \mu\text{s}$. Hence, the average distance traveled by the muons in this time interval as measured by an observer on the Earth is approximately $(0.99)(3.0 \times 10^8 \text{ m/s})(16 \times 10^{-6} \text{ s}) \approx 4.8 \times 10^3 \text{ m}$ as indicated in Figure 39.8b.

In 1976, at the laboratory of the European Council for Nuclear Research (CERN) in Geneva, muons injected into a large storage ring reached speeds of approximately $0.9994c$. Electrons produced by the decaying muons were detected by counters around the ring, enabling scientists to measure the decay rate and hence the muon lifetime. The lifetime of the moving muons was measured to be approximately 30 times as long as that of the stationary muon, in agreement with the prediction of relativity to within two parts in a thousand.

Example 39.1 What Is the Period of the Pendulum?

The period of a pendulum is measured to be 3.00 s in the reference frame of the pendulum. What is the period when measured by an observer moving at a speed of $0.960c$ relative to the pendulum?

SOLUTION

Conceptualize Let's change frames of reference. Instead of the observer moving at $0.960c$, we can take the equivalent point of view that the observer is at rest and the pendulum is moving at $0.960c$ past the stationary observer. Hence, the pendulum is an example of a clock moving at high speed with respect to an observer.

Categorize Based on the Conceptualize step, we can categorize this example as a substitution problem involving relativistic time dilation.

The proper time interval, measured in the rest frame of the pendulum, is $\Delta t_p = 3.00 \text{ s}$.

Use Equation 39.7 to find the dilated time interval:

$$\begin{aligned} \Delta t &= \gamma \Delta t_p = \frac{1}{\sqrt{1 - \frac{(0.960c)^2}{c^2}}} \Delta t_p = \frac{1}{\sqrt{1 - 0.9216}} \Delta t_p \\ &= 3.57(3.00 \text{ s}) = \mathbf{10.7 \text{ s}} \end{aligned}$$

continued

39.1 continued

This result shows that a moving pendulum is indeed measured to take longer to complete a period than a pendulum at rest does. The period increases by a factor of $\gamma = 3.57$.

WHAT IF? What if the speed of the observer increases by 4.00%? Does the dilated time interval increase by 4.00%?

Answer Based on the highly nonlinear behavior of γ as a function of v in Figure 39.7, we would guess that the increase in Δt would be different from 4.00%.

Find the new speed if it increases by 4.00%:

$$v_{\text{new}} = (1.040\ 0)(0.960c) = 0.998\ 4c$$

Perform the time dilation calculation again:

$$\begin{aligned}\Delta t &= \gamma \Delta t_p = \frac{1}{\sqrt{1 - \frac{(0.998\ 4c)^2}{c^2}}} \Delta t_p = \frac{1}{\sqrt{1 - 0.996\ 8}} \Delta t_p \\ &= 17.68(3.00\ \text{s}) = 53.1\ \text{s}\end{aligned}$$

Therefore, the 4.00% increase in speed results in almost a 400% increase in the dilated time!

Example 39.2 How Long Was Your Trip?

Suppose you are driving your car on a business trip and are traveling at 30 m/s. Your boss, who is waiting at your destination, expects the trip to take 5.0 h. When you arrive late, your excuse is that the clock in your car registered the passage of 5.0 h but that you were driving fast and so your clock ran more slowly than the clock in your boss's office. If your car clock actually did indicate a 5.0-h trip, how much time passed on your boss's clock, which was at rest on the Earth?

SOLUTION

Conceptualize The observer is your boss standing stationary on the Earth. The clock is in your car, moving at 30 m/s with respect to your boss.

Categorize The low speed of 30 m/s suggests we might categorize this problem as one in which we use classical concepts and equations. Based on the problem statement that the moving clock runs more slowly than a stationary clock, however, we categorize this problem as one involving time dilation.

Analyze The proper time interval, measured in the rest frame of the car, is $\Delta t_p = 5.0\ \text{h}$.

Use Equation 39.8 to evaluate γ :

$$\gamma = \frac{1}{\sqrt{1 - \frac{v^2}{c^2}}} = \frac{1}{\sqrt{1 - \frac{(3.0 \times 10^1\ \text{m/s})^2}{(3.0 \times 10^8\ \text{m/s})^2}}} = \frac{1}{\sqrt{1 - 10^{-14}}}$$

If you try to determine this value on your calculator, you will probably obtain $\gamma = 1$. Instead, perform a binomial expansion:

$$\gamma = (1 - 10^{-14})^{-1/2} \approx 1 + \frac{1}{2}(10^{-14}) = 1 + 5.0 \times 10^{-15}$$

Use Equation 39.7 to find the dilated time interval measured by your boss:

$$\begin{aligned}\Delta t &= \gamma \Delta t_p = (1 + 5.0 \times 10^{-15})(5.0\ \text{h}) \\ &= 5.0\ \text{h} + 2.5 \times 10^{-14}\ \text{h} = \mathbf{5.0\ \text{h} + 0.090\ \text{ns}}\end{aligned}$$

Finalize Your boss's clock would be only 0.090 ns ahead of your car clock. You might want to think of another excuse!

The Twin Paradox

An intriguing consequence of time dilation is the *twin paradox* (Fig. 39.9). Consider an experiment involving a set of twins named Speedo and Goslo. When they are 20 years old, Speedo, the more adventuresome of the two, sets out on an epic journey from the Earth to Planet X, located 20 light-years away. One light-year (ly) is the distance light travels through free space in 1 year. Furthermore, Speedo's

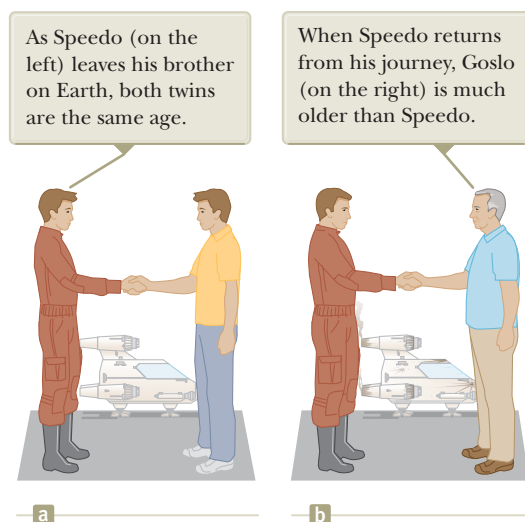


Figure 39.9 The twin paradox. Speedo takes a journey to a star 20 light-years away and returns to the Earth.

spacecraft is capable of reaching a speed of $0.95c$ relative to the inertial frame of his twin brother back home on the Earth. After reaching Planet X, Speedo becomes homesick and immediately returns to the Earth at the same speed $0.95c$. Upon his return, Speedo is shocked to discover that Goslo has aged 42 years and is now 62 years old. Speedo, on the other hand, has aged only 13 years.

The paradox is *not* that the twins have aged at different rates. Here is the apparent paradox. From Goslo's frame of reference, he was at rest while his brother traveled at a high speed away from him and then came back. According to Speedo, however, he himself remained stationary while Goslo and the Earth raced away from him and then headed back. Therefore, we might expect Speedo to claim that Goslo ages more slowly than himself. The situation appears to be symmetrical from either twin's point of view. Which twin *actually* ages more slowly?

The situation is actually not symmetrical. Consider a third observer moving at a constant speed relative to Goslo. According to the third observer, Goslo never changes inertial frames. Goslo's speed relative to the third observer is always the same. The third observer notes, however, that Speedo accelerates during his journey when he slows down and starts moving back toward the Earth, *changing reference frames in the process*. From the third observer's perspective, there is something very different about the motion of Goslo when compared to Speedo. Therefore, there is no paradox: only Goslo, who is always in a single inertial frame, can make correct predictions based on special relativity. Goslo finds that instead of aging 42 years, Speedo ages only $(1 - v^2/c^2)^{1/2}(42 \text{ years}) = 13 \text{ years}$. Of these 13 years, Speedo spends 6.5 years traveling to Planet X and 6.5 years returning.

- Quick Quiz 39.5** Suppose astronauts are paid according to the amount of time they spend traveling in space. After a long voyage traveling at a speed approaching c , would a crew rather be paid according to (a) an Earth-based clock, (b) their spacecraft's clock, or (c) either clock?

Length Contraction

The measured distance between two points in space also depends on the frame of reference of the observer. The **proper length** L_p of an object is the length measured by an observer *at rest relative to the object*. The length of an object measured by someone in a reference frame that is moving with respect to the object is always less than the proper length. This effect is known as **length contraction**.

To understand length contraction, consider a spacecraft traveling with a speed v from one star to another. There are two observers: one on the Earth and the other in the spacecraft. The observer at rest on the Earth (and also assumed to be at rest with

Pitfall Prevention 39.4

The Proper Length As with the proper time interval, it is *very* important in relativistic calculations to correctly identify the observer who measures the proper length. The proper length between two points in space is always the length measured by an observer at rest with respect to the points. Often, the proper time interval and the proper length are *not* measured by the same observer.

Length contraction ▶

respect to the two stars) measures the distance between the stars to be the proper length L_p . According to this observer, the time interval required for the spacecraft to complete the voyage is given by the particle under constant velocity model as $\Delta t = L_p/v$. The passages of the two stars by the spacecraft occur at the same position for the space traveler. Therefore, the space traveler measures the proper time interval Δt_p . Because of time dilation, the proper time interval is related to the Earth-measured time interval by $\Delta t_p = \Delta t/\gamma$. Because the space traveler reaches the second star in the time Δt_p , he or she concludes that the distance L between the stars is

$$L = v \Delta t_p = v \frac{\Delta t}{\gamma}$$

Because the proper length is $L_p = v \Delta t$, we see that

$$L = \frac{L_p}{\gamma} = L_p \sqrt{1 - \frac{v^2}{c^2}} \quad (39.9)$$

where $\sqrt{1 - v^2/c^2}$ is a factor less than unity. If an object has a proper length L_p when it is measured by an observer at rest with respect to the object, its length L when it moves with speed v in a direction parallel to its length is measured to be shorter according to Equation 39.9.

For example, suppose a meterstick moves past a stationary Earth-based observer with speed v as in Figure 39.10. The length of the meterstick as measured by an observer in a frame attached to the stick is the proper length L_p shown in Figure 39.10a. The length of the stick L measured by the Earth observer is shorter than L_p by the factor $(1 - v^2/c^2)^{1/2}$ as suggested in Figure 39.10b. Notice that length contraction takes place only along the direction of motion.

The proper length and the proper time interval are defined differently. The proper length is measured by an observer for whom the endpoints of the length remain fixed in space. The proper time interval is measured by someone for whom the two events take place at the same position in space. As an example of this point, let's return to the decaying muons moving at speeds close to the speed of light. An observer in the muon's reference frame measures the proper lifetime, whereas an Earth-based observer measures the proper length (the distance between the creation point and the decay point in Fig. 39.8b). In the muon's reference frame, there is no time dilation, but the distance of travel to the surface is shorter when measured in this frame. Likewise, in the Earth observer's reference frame, there is time dilation, but the distance of travel is measured to be the proper length. Therefore, when calculations on the muon are performed in both frames, the outcome of the experiment in one frame is the same as the outcome in the other frame: more muons reach the surface than would be predicted without relativistic effects.

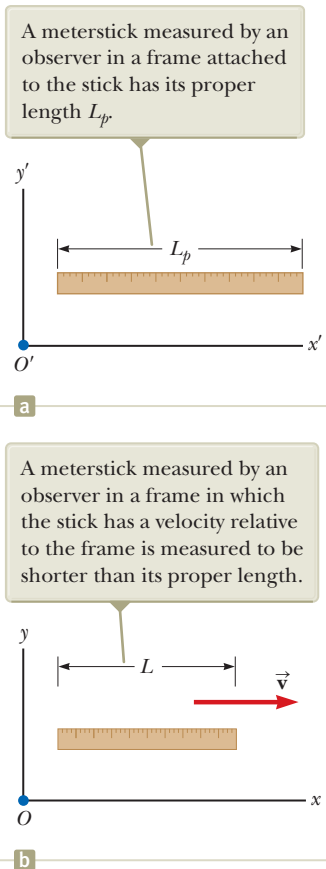


Figure 39.10 The length of a meterstick is measured by two observers.

Quick Quiz 39.6 You are packing for a trip to another star. During the journey, you will be traveling at $0.99c$. You are trying to decide whether you should buy smaller sizes of your clothing because you will be thinner on your trip due to length contraction. You also plan to save money by reserving a smaller cabin to sleep in because you will be shorter when you lie down. Should you (a) buy smaller sizes of clothing, (b) reserve a smaller cabin, (c) do neither of these things, or (d) do both of these things?

Quick Quiz 39.7 You are observing a spacecraft moving away from you. You measure it to be shorter than when it was at rest on the ground next to you. You also see a clock through the spacecraft window, and you observe that the passage of time on the clock is measured to be slower than that of the watch on your wrist. Compared with when the spacecraft was on the ground, what do you measure if the spacecraft turns around and comes *toward* you at the same speed? (a) The spacecraft is measured to be longer, and the clock runs faster. (b) The spacecraft is measured to be longer, and the clock runs slower. (c) The spacecraft is

- ⋮ measured to be shorter, and the clock runs faster. (d) The spacecraft is mea-
- sured to be shorter, and the clock runs slower.

Space–Time Graphs

It is sometimes helpful to represent a physical situation with a **space–time graph**, in which ct is the ordinate and position x is the abscissa. The twin paradox is displayed in such a graph in Figure 39.11 from Goslo’s point of view. A path through space–time is called a **world-line**. At the origin, the world-lines of Speedo (blue) and Goslo (green) coincide because the twins are in the same location at the same time. After Speedo leaves on his trip, his world-line diverges from that of his brother. Goslo’s world-line is vertical because he remains fixed in location. At Goslo and Speedo’s reunion, the two world-lines again come together. It would be impossible for Speedo to have a world-line that crossed the path of a light beam that left the Earth when he did. To do so would require him to have a speed greater than c (which, as shown in Sections 39.6 and 39.7, is not possible).

World-lines for light beams are diagonal lines on space–time graphs, typically drawn at 45° to the right or left of vertical (assuming the x and ct axes have the same scales), depending on whether the light beam is traveling in the direction of increasing or decreasing x . All possible future events for Goslo and Speedo lie above the x axis and between the red-brown lines in Figure 39.11 because neither twin can travel faster than light. The only past events that Goslo and Speedo could have experienced occur between two similar 45° world-lines that approach the origin from below the x axis.

If Figure 39.11 is rotated about the ct axis, the red-brown lines sweep out a cone, called the *light cone*, which generalizes Figure 39.11 to two space dimensions. The y axis can be imagined coming out of the page. All future events for an observer at the origin must lie within the light cone. We can imagine another rotation that would generalize the light cone to three space dimensions to include z , but because of the requirement for four dimensions (three space dimensions and time), we cannot represent this situation in a two-dimensional drawing on paper.

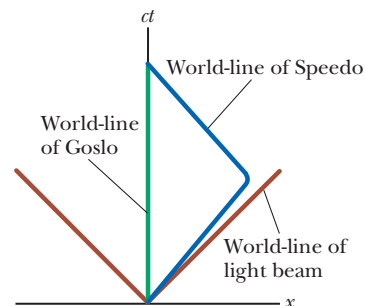


Figure 39.11 The twin paradox on a space–time graph. The twin who stays on the Earth has a world-line along the ct axis (green). The path of the traveling twin through space–time is represented by a world-line that changes direction (blue). The red-brown lines are world-lines for light beams traveling in the positive x direction (on the right) or the negative x direction (on the left).

Example 39.3

A Voyage to Sirius AM

An astronaut takes a trip to Sirius, which is located a distance of 8 light-years from the Earth. The astronaut measures the time of the one-way journey to be 6 years. If the spaceship moves at a constant speed of $0.8c$, how can the 8-ly distance be reconciled with the 6-year trip time measured by the astronaut?

SOLUTION

Conceptualize An observer on the Earth measures light to require 8 years to travel between Sirius and the Earth. The astronaut measures a time interval for his travel of only 6 years. Is the astronaut traveling faster than light?

Categorize Because the astronaut is measuring a length of space between the Earth and Sirius that is in motion with respect to her, we categorize this example as a length contraction problem. We also model the astronaut as a *particle under constant velocity*.

Analyze The distance of 8 ly represents the proper length from the Earth to Sirius measured by an observer on the Earth seeing both objects nearly at rest.

Calculate the contracted length measured by the astronaut using Equation 39.9:

$$L = \frac{8 \text{ ly}}{\gamma} = (8 \text{ ly})\sqrt{1 - \frac{v^2}{c^2}} = (8 \text{ ly})\sqrt{1 - \frac{(0.8c)^2}{c^2}} = 5 \text{ ly}$$

Use the particle under constant velocity model to find the travel time measured on the astronaut’s clock:

$$\Delta t = \frac{L}{v} = \frac{5 \text{ ly}}{0.8c} = \frac{5 \text{ ly}}{0.8(1 \text{ ly/yr})} = 6 \text{ yr}$$

continued

39.3 continued

Finalize Notice that we have used the value for the speed of light as $c = 1 \text{ ly/yr}$. The trip takes a time interval shorter than 8 years for the astronaut because, to her, the distance between the Earth and Sirius is measured to be shorter.

WHAT IF? What if this trip is observed with a very powerful telescope by a technician in Mission Control on the Earth? At what time will this technician *see* that the astronaut has arrived at Sirius?

Answer The time interval the technician measures for the astronaut to arrive is

$$\Delta t = \frac{L_p}{v} = \frac{8 \text{ ly}}{0.8c} = 10 \text{ yr}$$

For the technician to *see* the arrival, the light from the scene of the arrival must travel back to the Earth and enter the telescope. This travel requires a time interval of

$$\Delta t = \frac{L_p}{v} = \frac{8 \text{ ly}}{c} = 8 \text{ yr}$$

Therefore, the technician sees the arrival after $10 \text{ yr} + 8 \text{ yr} = 18 \text{ yr}$. If the astronaut immediately turns around and comes back home, she arrives, according to the technician, 20 years after leaving, only 2 years *after the technician saw her arrive!* In addition, the astronaut would have aged by only 12 years.

Example 39.4 The Pole-in-the-Barn Paradox AM

The twin paradox, discussed earlier, is a classic “paradox” in relativity. Another classic “paradox” is as follows. Suppose a runner moving at $0.75c$ carries a horizontal pole 15 m long toward a barn that is 10 m long. The barn has front and rear doors that are initially open. An observer on the ground can instantly and simultaneously close and open the two doors by remote control. When the runner and the pole are inside the barn, the ground observer closes and then opens both doors so that the runner and pole are momentarily captured inside the barn and then proceed to exit the barn from the back doorway. Do both the runner and the ground observer agree that the runner makes it safely through the barn?

SOLUTION

Conceptualize From your everyday experience, you would be surprised to see a 15-m pole fit inside a 10-m barn, but we are becoming used to surprising results in relativistic situations.

Categorize The pole is in motion with respect to the ground observer so that the observer measures its length to be contracted, whereas the stationary barn has a proper length of 10 m. We categorize this example as a length contraction problem. The runner carrying the pole is modeled as a *particle under constant velocity*.

Analyze Use Equation 39.9 to find the contracted length of the pole according to the ground observer:

$$L_{\text{pole}} = L_p \sqrt{1 - \frac{v^2}{c^2}} = (15 \text{ m}) \sqrt{1 - (0.75)^2} = 9.9 \text{ m}$$

Therefore, the ground observer measures the pole to be slightly shorter than the barn and there is no problem with momentarily capturing the pole inside it. The “paradox” arises when we consider the runner’s point of view.

Use Equation 39.9 to find the contracted length of the barn according to the running observer:

$$L_{\text{barn}} = L_p \sqrt{1 - \frac{v^2}{c^2}} = (10 \text{ m}) \sqrt{1 - (0.75)^2} = 6.6 \text{ m}$$

Because the pole is in the rest frame of the runner, the runner measures it to have its proper length of 15 m. Now the situation looks even worse: How can a 15-m pole fit inside a 6.6-m barn? Although this question is the classic one that is often asked, it is not the question we have asked because it is not the important one. We asked, “*Does the runner make it safely through the barn?*”

The resolution of the “paradox” lies in the relativity of simultaneity. The closing of the two doors is measured to be simultaneous by the ground observer. Because the doors are at different positions, however, they do not close simulta-

39.4 continued

neously as measured by the runner. The rear door closes and then opens first, allowing the leading end of the pole to exit. The front door of the barn does not close until the trailing end of the pole passes by.

We can analyze this “paradox” using a space–time graph. Figure 39.12a is a space–time graph from the ground observer’s point of view. We choose $x = 0$ as the position of the front doorway of the barn and $t = 0$ as the instant at which the leading end of the pole is located at the front doorway of the barn. The world-lines for the two doorways of the barn are separated by 10 m and are vertical because the barn is not moving relative to this observer. For the pole, we follow two tilted world-lines, one for each end of the moving pole. These world-lines are 9.9 m apart horizontally, which is the contracted length seen by the ground observer. As seen in Figure 39.12a, the pole is entirely within the barn at some time.

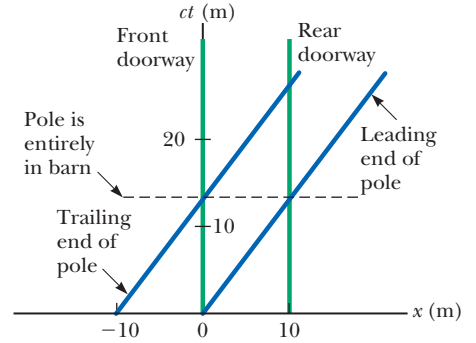
Figure 39.12b shows the space–time graph according to the runner. Here, the world-lines for the pole are separated by 15 m and are vertical because the pole is at rest in the runner’s frame of reference. The barn is hurtling *toward* the runner, so the world-lines for the front and rear doorways of the barn are tilted to the left. The world-lines for the barn are separated by 6.6 m, the contracted length as seen by the runner. The leading end of the pole leaves the rear doorway of the barn long before the trailing end of the pole enters the barn. Therefore, the opening of the rear door occurs before the closing of the front door.

From the ground observer’s point of view, use the particle under constant velocity model to find the time after $t = 0$ at which the trailing end of the pole enters the barn:

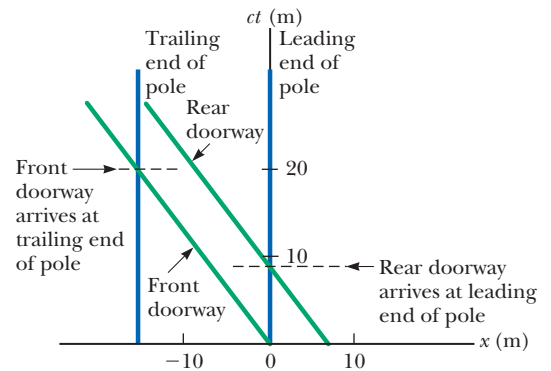
From the runner’s point of view, use the particle under constant velocity model to find the time at which the leading end of the pole leaves the barn:

Find the time at which the trailing end of the pole enters the front door of the barn:

Finalize From Equation (1), the pole should be completely inside the barn at a time corresponding to $ct = 13.2$ m. This situation is consistent with the point on the ct axis in Figure 39.12a where the pole is inside the barn. From Equation (2), the leading end of the pole leaves the barn at $ct = 8.8$ m. This situation is consistent with the point on the ct axis in Figure 39.12b where the rear doorway of the barn arrives at the leading end of the pole. Equation (3) gives $ct = 20$ m, which agrees with the instant shown in Figure 39.12b at which the front doorway of the barn arrives at the trailing end of the pole.



a



b

Figure 39.12 (Example 39.4) Space–time graphs for the pole-in-the-barn paradox (a) from the ground observer’s point of view and (b) from the runner’s point of view.

$$(1) \quad t = \frac{\Delta x}{v} = \frac{9.9 \text{ m}}{0.75c} = \frac{13.2 \text{ m}}{c}$$

$$(2) \quad t = \frac{\Delta x}{v} = \frac{6.6 \text{ m}}{0.75c} = \frac{8.8 \text{ m}}{c}$$

$$(3) \quad t = \frac{\Delta x}{v} = \frac{15 \text{ m}}{0.75c} = \frac{20 \text{ m}}{c}$$

The Relativistic Doppler Effect

Another important consequence of time dilation is the shift in frequency observed for light emitted by atoms in motion as opposed to light emitted by atoms at rest. This phenomenon, known as the Doppler effect, was introduced in Chapter 17 as it pertains to sound waves. In the case of sound, the velocity v_s of the source with

respect to the medium of propagation can be distinguished from the velocity v_o of the observer with respect to the medium (the air). Light waves must be analyzed differently, however, because *they require no medium of propagation*, and no method exists for distinguishing the velocity of a light source from the velocity of the observer. The only measurable velocity is the *relative velocity* v between the source and the observer.

If a light source and an observer approach each other with a relative speed v , the frequency f' measured by the observer is

$$f' = \frac{\sqrt{1 + v/c}}{\sqrt{1 - v/c}} f \quad (39.10)$$

where f is the frequency of the source measured in its rest frame. This relativistic Doppler shift equation, unlike the Doppler shift equation for sound, depends only on the relative speed v of the source and observer and holds for relative speeds as great as c . As you might expect, the equation predicts that $f' > f$ when the source and observer approach each other. We obtain the expression for the case in which the source and observer recede from each other by substituting negative values for v in Equation 39.10.

The most spectacular and dramatic use of the relativistic Doppler effect is the measurement of shifts in the frequency of light emitted by a moving astronomical object such as a galaxy. Light emitted by atoms and normally found in the extreme violet region of the spectrum is shifted toward the red end of the spectrum for atoms in other galaxies, indicating that these galaxies are *receding* from us. American astronomer Edwin Hubble (1889–1953) performed extensive measurements of this *red shift* to confirm that most galaxies are moving away from us, indicating that the Universe is expanding.

39.5 The Lorentz Transformation Equations

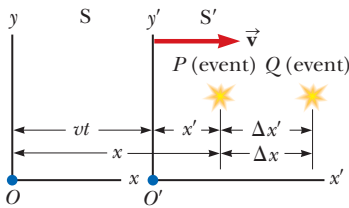


Figure 39.13 Events occur at points P and Q and are observed by an observer at rest in the S frame and another in the S' frame, which is moving to the right with a speed v .

Suppose two events occur at points P and Q and are reported by two observers, one at rest in a frame S and another in a frame S' that is moving to the right with speed v as in Figure 39.13. The observer in S reports the events with space–time coordinates (x, y, z, t) , and the observer in S' reports the same events using the coordinates (x', y', z', t') . Equation 39.1 predicts that the distance between the two points in space at which the events occur does not depend on motion of the observer: $\Delta x = \Delta x'$. Because this prediction is contradictory to the notion of length contraction, the Galilean transformation is not valid when v approaches the speed of light. In this section, we present the correct transformation equations that apply for all speeds in the range $0 < v < c$.

The equations that are valid for all speeds and that enable us to transform coordinates from S to S' are the **Lorentz transformation equations**:

$$x' = \gamma(x - vt) \quad y' = y \quad z' = z \quad t' = \gamma\left(t - \frac{v}{c^2}x\right) \quad (39.11)$$

These transformation equations were developed by Hendrik A. Lorentz (1853–1928) in 1890 in connection with electromagnetism. It was Einstein, however, who recognized their physical significance and took the bold step of interpreting them within the framework of the special theory of relativity.

Notice the difference between the Galilean and Lorentz time equations. In the Galilean case, $t = t'$. In the Lorentz case, however, the value for t' assigned to an event by an observer O' in the S' frame in Figure 39.13 depends both on the time t and on the coordinate x as measured by an observer O in the S frame, which is consistent with the notion that an event is characterized by four space–time coordinates (x, y, z, t) . In other words, in relativity, space and time are *not* separate concepts but rather are closely interwoven with each other.

Lorentz transformation ►
for $S \rightarrow S'$

If you wish to transform coordinates in the S' frame to coordinates in the S frame, simply replace v by $-v$ and interchange the primed and unprimed coordinates in Equations 39.11:

$$x = \gamma(x' + vt') \quad y = y' \quad z = z' \quad t = \gamma\left(t' + \frac{v}{c^2}x'\right) \quad (39.12)$$

◀ Inverse Lorentz transformation for $S' \rightarrow S$

When $v \ll c$, the Lorentz transformation equations should reduce to the Galilean equations. As v approaches zero, $v/c \ll 1$; therefore, $\gamma \rightarrow 1$ and Equations 39.11 indeed reduce to the Galilean space–time transformation equations in Equation 39.1.

In many situations, we would like to know the difference in coordinates between two events or the time interval between two events as seen by observers O and O' . From Equations 39.11 and 39.12, we can express the differences between the four variables x , x' , t , and t' in the form

$$\left. \begin{aligned} \Delta x' &= \gamma(\Delta x - v \Delta t) \\ \Delta t' &= \gamma\left(\Delta t - \frac{v}{c^2} \Delta x\right) \end{aligned} \right\} S \rightarrow S' \quad (39.13)$$

$$\left. \begin{aligned} \Delta x &= \gamma(\Delta x' + v \Delta t') \\ \Delta t &= \gamma\left(\Delta t' + \frac{v}{c^2} \Delta x'\right) \end{aligned} \right\} S' \rightarrow S \quad (39.14)$$

where $\Delta x' = x'_2 - x'_1$ and $\Delta t' = t'_2 - t'_1$ are the differences measured by observer O' and $\Delta x = x_2 - x_1$ and $\Delta t = t_2 - t_1$ are the differences measured by observer O . (We have not included the expressions for relating the y and z coordinates because they are unaffected by motion along the x direction.⁵)

Example 39.5 Simultaneity and Time Dilation Revisited

(A) Use the Lorentz transformation equations in difference form to show that simultaneity is not an absolute concept.

SOLUTION

Conceptualize Imagine two events that are simultaneous and separated in space as measured in the S' frame such that $\Delta t' = 0$ and $\Delta x' \neq 0$. These measurements are made by an observer O' who is moving with speed v relative to O .

Categorize The statement of the problem tells us to categorize this example as one involving the use of the Lorentz transformation.

Analyze From the expression for Δt given in Equation 39.14, find the time interval Δt measured by observer O :

$$\Delta t = \gamma\left(\Delta t' + \frac{v}{c^2} \Delta x'\right) = \gamma\left(0 + \frac{v}{c^2} \Delta x'\right) = \gamma \frac{v}{c^2} \Delta x'$$

Finalize The time interval for the same two events as measured by O is nonzero, so the events do not appear to be simultaneous to O .

(B) Use the Lorentz transformation equations in difference form to show that a moving clock is measured to run more slowly than a clock that is at rest with respect to an observer.

SOLUTION

Conceptualize Imagine that observer O' carries a clock that he uses to measure a time interval $\Delta t'$. He finds that two events occur at the same place in his reference frame ($\Delta x' = 0$) but at different times ($\Delta t' \neq 0$). Observer O' is moving with speed v relative to O . *continued*

⁵Although relative motion of the two frames along the x axis does not change the y and z coordinates of an object, it does change the y and z velocity components of an object moving in either frame as noted in Section 39.6.

39.5 continued

Categorize The statement of the problem tells us to categorize this example as one involving the use of the Lorentz transformation.

Analyze From the expression for Δt given in Equation 39.14, find the time interval Δt measured by observer O :

$$\Delta t = \gamma \left(\Delta t' + \frac{v}{c^2} \Delta x' \right) = \gamma \left[\Delta t' + \frac{v}{c^2} (0) \right] = \gamma \Delta t'$$

Finalize This result is the equation for time dilation found earlier (Eq. 39.7), where $\Delta t' = \Delta t_p$ is the proper time interval measured by the clock carried by observer O' . Therefore, O measures the moving clock to run slow.

39.6 The Lorentz Velocity Transformation Equations

Suppose two observers in relative motion with respect to each other are both observing an object's motion. Previously, we defined an event as occurring at an instant of time. Now let's interpret the "event" as the object's motion. We know that the Galilean velocity transformation (Eq. 39.2) is valid for low speeds. How do the observers' measurements of the velocity of the object relate to each other if the speed of the object or the relative speed of the observers is close to that of light? Once again, S' is our frame moving at a speed v relative to S . Suppose an object has a velocity component u'_x measured in the S' frame, where

$$u'_x = \frac{dx'}{dt'} \quad (39.15)$$


Using Equation 39.11, we have

$$\begin{aligned} dx' &= \gamma(dx - v dt) \\ dt' &= \gamma\left(dt - \frac{v}{c^2} dx\right) \end{aligned}$$

Substituting these values into Equation 39.15 gives

$$u'_x = \frac{dx - v dt}{dt - \frac{v}{c^2} dx} = \frac{\frac{dx}{dt} - v}{1 - \frac{v}{c^2} \frac{dx}{dt}}$$

The term dx/dt , however, is simply the velocity component u_x of the object measured by an observer in S , so this expression becomes

Lorentz velocity transformation for $S \rightarrow S'$ 

$$u'_x = \frac{u_x - v}{1 - \frac{u_x v}{c^2}} \quad (39.16)$$

If the object has velocity components along the y and z axes, the components as measured by an observer in S' are

$$u'_y = \frac{u_y}{\gamma\left(1 - \frac{u_x v}{c^2}\right)} \quad \text{and} \quad u'_z = \frac{u_z}{\gamma\left(1 - \frac{u_x v}{c^2}\right)} \quad (39.17)$$

Notice that u'_y and u'_z do not contain the parameter v in the numerator because the relative velocity is along the x axis.

When v is much smaller than c (the nonrelativistic case), the denominator of Equation 39.16 approaches unity and so $u'_x \approx u_x - v$, which is the Galilean veloc-

ity transformation equation. In another extreme, when $u_x = c$, Equation 39.16 becomes

$$u'_x = \frac{c - v}{1 - \frac{cv}{c^2}} = \frac{c \left(1 - \frac{v}{c}\right)}{1 - \frac{v}{c}} = c$$

This result shows that a speed measured as c by an observer in S is also measured as c by an observer in S' , independent of the relative motion of S and S' . This conclusion is consistent with Einstein's second postulate: the speed of light must be c relative to all inertial reference frames. Furthermore, we find that the speed of an object can never be measured as larger than c . That is, the speed of light is the ultimate speed. We shall return to this point later.

To obtain u_x in terms of u'_x , we replace v by $-v$ in Equation 39.16 and interchange the roles of u_x and u'_x :

$$u_x = \frac{u'_x + v}{1 + \frac{u'_x v}{c^2}} \quad (39.18)$$

- Quick Quiz 39.8** You are driving on a freeway at a relativistic speed. (i) Straight ahead of you, a technician standing on the ground turns on a searchlight and a beam of light moves exactly vertically upward as seen by the technician. As you observe the beam of light, do you measure the magnitude of the vertical component of its velocity as (a) equal to c , (b) greater than c , or (c) less than c ? (ii) If the technician aims the searchlight directly at you instead of upward, do you measure the magnitude of the horizontal component of its velocity as (a) equal to c , (b) greater than c , or (c) less than c ?

Example 39.6 Relative Velocity of Two Spacecraft

Two spacecraft A and B are moving in opposite directions as shown in Figure 39.14. An observer on the Earth measures the speed of spacecraft A to be $0.750c$ and the speed of spacecraft B to be $0.850c$. Find the velocity of spacecraft B as observed by the crew on spacecraft A.

SOLUTION

Conceptualize There are two observers, one (O) on the Earth and one (O') on spacecraft A. The event is the motion of spacecraft B.

Categorize Because the problem asks to find an observed velocity, we categorize this example as one requiring the Lorentz velocity transformation.

Analyze The Earth-based observer at rest in the S frame makes two measurements, one of each spacecraft. We want to find the velocity of spacecraft B as measured by the crew on spacecraft A. Therefore, $u_x = -0.850c$. The velocity of spacecraft A is also the velocity of the observer at rest in spacecraft A (the S' frame) relative to the observer at rest on the Earth. Therefore, $v = 0.750c$.

Obtain the velocity u'_x of spacecraft B relative to spacecraft A using Equation 39.16:

$$u'_x = \frac{u_x - v}{1 - \frac{u_x v}{c^2}} = \frac{-0.850c - 0.750c}{1 - \frac{(-0.850c)(0.750c)}{c^2}} = -0.977c$$

Finalize The negative sign indicates that spacecraft B is moving in the negative x direction as observed by the crew on spacecraft A. Is that consistent with your expectation from Figure 39.14? Notice that the speed is less than c . That is, an

continued

Pitfall Prevention 39.5

What Can the Observers Agree On?

We have seen several measurements that the two observers O and O' do *not* agree on: (1) the time interval between events that take place in the same position in one of their frames, (2) the distance between two points that remain fixed in one of their frames, (3) the velocity components of a moving particle, and (4) whether two events occurring at different locations in both frames are simultaneous or not. The two observers *can* agree on (1) their relative speed of motion v with respect to each other, (2) the speed c of any ray of light, and (3) the simultaneity of two events that take place at the same position *and* time in some frame.

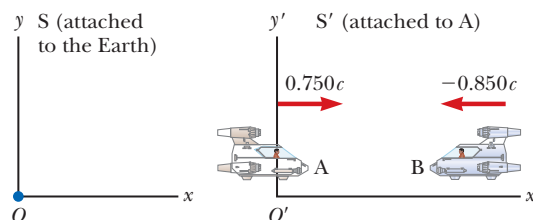


Figure 39.14 (Example 39.6) Two spacecraft A and B move in opposite directions. The speed of spacecraft B relative to spacecraft A is *less* than c and is obtained from the relativistic velocity transformation equation.

39.6 continued

object whose speed is less than c in one frame of reference must have a speed less than c in any other frame. (Had you used the Galilean velocity transformation equation in this example, you would have found that $u'_x = u_x - v = -0.850c - 0.750c = -1.60c$, which is impossible. The Galilean transformation equation does not work in relativistic situations.)

WHAT IF? What if the two spacecraft pass each other? What is their relative speed now?

Answer The calculation using Equation 39.16 involves only the velocities of the two spacecraft and does not depend on their locations. After they pass each other, they have the same velocities, so the velocity of spacecraft B as observed by the crew on spacecraft A is the same, $-0.977c$. The only difference after they pass is that spacecraft B is receding from spacecraft A, whereas it was approaching spacecraft A before it passed.

Example 39.7 Relativistic Leaders of the Pack

Two motorcycle pack leaders named David and Emily are racing at relativistic speeds along perpendicular paths as shown in Figure 39.15. How fast does Emily recede as seen by David over his right shoulder?

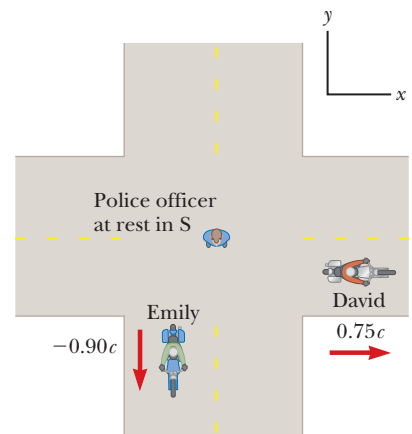
SOLUTION

Conceptualize The two observers are David and the police officer in Figure 39.15. The event is the motion of Emily. Figure 39.15 represents the situation as seen by the police officer at rest in frame S. Frame S' moves along with David.

Categorize Because the problem asks to find an observed velocity, we categorize this problem as one requiring the Lorentz velocity transformation. The motion takes place in two dimensions.

Analyze Identify the velocity components for David and Emily according to the police officer:

Figure 39.15 (Example 39.7) David moves east with a speed $0.75c$ relative to the police officer, and Emily travels south at a speed $0.90c$ relative to the officer.



$$\text{David: } v_x = v = 0.75c \quad v_y = 0$$

$$\text{Emily: } u_x = 0 \quad u_y = -0.90c$$

Using Equations 39.16 and 39.17, calculate u'_x and u'_y for Emily as measured by David:

$$u'_x = \frac{u_x - v}{1 - \frac{u_x v}{c^2}} = \frac{0 - 0.75c}{1 - \frac{(0)(0.75c)}{c^2}} = -0.75c$$

$$u'_y = \frac{u_y}{\gamma \left(1 - \frac{u_x v}{c^2}\right)} = \frac{-0.90c}{\sqrt{1 - \frac{(0.75c)^2}{c^2}} \left(1 - \frac{(0)(0.75c)}{c^2}\right)} = -0.60c$$

Using the Pythagorean theorem, find the speed of Emily as measured by David:

$$u' = \sqrt{(u'_x)^2 + (u'_y)^2} = \sqrt{(-0.75c)^2 + (-0.60c)^2} = 0.96c$$

Finalize This speed is less than c , as required by the special theory of relativity.

39.7 Relativistic Linear Momentum

To describe the motion of particles within the framework of the special theory of relativity properly, you must replace the Galilean transformation equations by the Lorentz transformation equations. Because the laws of physics must remain unchanged under the Lorentz transformation, we must generalize Newton's laws and the definitions of linear momentum and energy to conform to the Lorentz

transformation equations and the principle of relativity. These generalized definitions should reduce to the classical (nonrelativistic) definitions for $v \ll c$.

First, recall from the isolated system model that when two particles (or objects that can be modeled as particles) collide, the total momentum of the isolated system of the two particles remains constant. Suppose we observe this collision in a reference frame S and confirm that the momentum of the system is conserved. Now imagine that the momenta of the particles are measured by an observer in a second reference frame S' moving with velocity \vec{v} relative to the first frame. Using the Lorentz velocity transformation equation and the classical definition of linear momentum, $\vec{p} = m\vec{u}$ (where \vec{u} is the velocity of a particle), we find that linear momentum of the system is *not* measured to be conserved by the observer in S' . Because the laws of physics are the same in all inertial frames, however, linear momentum of the system must be conserved in all frames. We have a contradiction. In view of this contradiction and assuming the Lorentz velocity transformation equation is correct, we must modify the definition of linear momentum so that the momentum of an isolated system is conserved for all observers. For any particle, the correct relativistic equation for linear momentum that satisfies this condition is

$$\vec{p} \equiv \frac{m\vec{u}}{\sqrt{1 - \frac{u^2}{c^2}}} = \gamma m\vec{u} \quad (39.19)$$

where m is the mass of the particle and \vec{u} is the velocity of the particle. When u is much less than c , $\gamma = (1 - u^2/c^2)^{-1/2}$ approaches unity and \vec{p} approaches $m\vec{u}$. Therefore, the relativistic equation for \vec{p} reduces to the classical expression when u is much smaller than c , as it should.

The relativistic force \vec{F} acting on a particle whose linear momentum is \vec{p} is defined as

$$\vec{F} \equiv \frac{d\vec{p}}{dt} \quad (39.20)$$

where \vec{p} is given by Equation 39.19. This expression, which is the relativistic form of Newton's second law, is reasonable because it preserves classical mechanics in the limit of low velocities and is consistent with conservation of linear momentum for an isolated system ($\vec{F}_{\text{ext}} = 0$) both relativistically and classically.

It is left as an end-of-chapter problem (Problem 88) to show that under relativistic conditions, the acceleration \vec{a} of a particle decreases under the action of a constant force, in which case $a \propto (1 - u^2/c^2)^{3/2}$. This proportionality shows that as the particle's speed approaches c , the acceleration caused by any finite force approaches zero. Hence, it is impossible to accelerate a particle from rest to a speed $u \geq c$. This argument reinforces that the speed of light is the ultimate speed, the speed limit of the Universe. It is the maximum possible speed for energy transfer and for information transfer. Any object with mass must move at a lower speed.

Example 39.8 Linear Momentum of an Electron

An electron, which has a mass of 9.11×10^{-31} kg, moves with a speed of $0.750c$. Find the magnitude of its relativistic momentum and compare this value with the momentum calculated from the classical expression.

SOLUTION

Conceptualize Imagine an electron moving with high speed. The electron carries momentum, but the magnitude of its momentum is not given by $p = mu$ because the speed is relativistic.

Categorize We categorize this example as a substitution problem involving a relativistic equation.

Pitfall Prevention 39.6

Watch Out for "Relativistic Mass"

Some older treatments of relativity maintained the conservation of momentum principle at high speeds by using a model in which a particle's mass increases with speed. You might still encounter this notion of "relativistic mass" in your outside reading, especially in older books. Be aware that this notion is no longer widely accepted; today, mass is considered as *invariant*, independent of speed. The mass of an object in all frames is considered to be the mass as measured by an observer at rest with respect to the object.

Definition of relativistic linear momentum

continued

39.8 continued

Use Equation 39.19 with $u = 0.750c$ to find the magnitude of the momentum:

$$p = \frac{m_e u}{\sqrt{1 - \frac{u^2}{c^2}}}$$

$$p = \frac{(9.11 \times 10^{-31} \text{ kg})(0.750)(3.00 \times 10^8 \text{ m/s})}{\sqrt{1 - \frac{(0.750c)^2}{c^2}}}$$

$$= 3.10 \times 10^{-22} \text{ kg} \cdot \text{m/s}$$

The classical expression (used incorrectly here) gives $p_{\text{classical}} = m_e u = 2.05 \times 10^{-22} \text{ kg} \cdot \text{m/s}$. Hence, the correct relativistic result is 50% greater than the classical result!

39.8 Relativistic Energy

We have seen that the definition of linear momentum requires generalization to make it compatible with Einstein's postulates. This conclusion implies that the definition of kinetic energy must most likely be modified also.

To derive the relativistic form of the work–kinetic energy theorem, imagine a particle moving in one dimension along the x axis. A force in the x direction causes the momentum of the particle to change according to Equation 39.20. In what follows, we assume the particle is accelerated from rest to some final speed u . The work done by the force F on the particle is

$$W = \int_{x_1}^{x_2} F dx = \int_{x_1}^{x_2} \frac{dp}{dt} dx \quad (39.21)$$

To perform this integration and find the work done on the particle and the relativistic kinetic energy as a function of u , we first evaluate dp/dt :

$$\frac{dp}{dt} = \frac{d}{dt} \frac{mu}{\sqrt{1 - \frac{u^2}{c^2}}} = \frac{m}{\left(1 - \frac{u^2}{c^2}\right)^{3/2}} \frac{du}{dt}$$

Substituting this expression for dp/dt and $dx = u dt$ into Equation 39.21 gives

$$W = \int_0^t \frac{m}{\left(1 - \frac{u^2}{c^2}\right)^{3/2}} \frac{du}{dt} (u dt) = m \int_0^u \frac{u}{\left(1 - \frac{u^2}{c^2}\right)^{3/2}} du$$

where we use the limits 0 and u in the integral because the integration variable has been changed from t to u . Evaluating the integral gives

$$W = \frac{mc^2}{\sqrt{1 - \frac{u^2}{c^2}}} - mc^2 \quad (39.22)$$

Recall from Chapter 7 that the work done by a force acting on a system consisting of a single particle equals the change in kinetic energy of the particle: $W = \Delta K$. Because we assumed the initial speed of the particle is zero, its initial kinetic energy is zero, so $W = K - K_i = K - 0 = K$. Therefore, the work W in Equation 39.22 is equivalent to the relativistic kinetic energy K :

Relativistic kinetic energy ►

$$K = \frac{mc^2}{\sqrt{1 - \frac{u^2}{c^2}}} - mc^2 = \gamma mc^2 - mc^2 = (\gamma - 1) mc^2 \quad (39.23)$$

This equation is routinely confirmed by experiments using high-energy particle accelerators.

At low speeds, where $u/c \ll 1$, Equation 39.23 should reduce to the classical expression $K = \frac{1}{2}mu^2$. We can check that by using the binomial expansion $(1 - \beta^2)^{-1/2} \approx 1 + \frac{1}{2}\beta^2 + \dots$ for $\beta \ll 1$, where the higher-order powers of β are neglected in the expansion. (In treatments of relativity, β is a common symbol used to represent u/c or v/c .) In our case, $\beta = u/c$, so

$$\gamma = \frac{1}{\sqrt{1 - \frac{u^2}{c^2}}} = \left(1 - \frac{u^2}{c^2}\right)^{-1/2} \approx 1 + \frac{1}{2}\frac{u^2}{c^2}$$

Substituting this result into Equation 39.23 gives

$$K \approx \left[\left(1 + \frac{1}{2}\frac{u^2}{c^2}\right) - 1 \right] mc^2 = \frac{1}{2}mu^2 \quad (\text{for } u/c \ll 1)$$

which is the classical expression for kinetic energy. A graph comparing the relativistic and nonrelativistic expressions is given in Figure 39.16. In the relativistic case, the particle speed never exceeds c , regardless of the kinetic energy. The two curves are in good agreement when $u \ll c$.

The constant term mc^2 in Equation 39.23, which is independent of the speed of the particle, is called the **rest energy** E_R of the particle:

$$E_R = mc^2 \quad (39.24)$$

Equation 39.24 shows that **mass is a form of energy**, where c^2 is simply a constant conversion factor. This expression also shows that a small mass corresponds to an enormous amount of energy, a concept fundamental to nuclear and elementary-particle physics.

The term γmc^2 in Equation 39.23, which depends on the particle speed, is the sum of the kinetic and rest energies. It is called the **total energy** E :

Total energy = kinetic energy + rest energy

$$E = K + mc^2 \quad (39.25)$$

or

$$E = \frac{mc^2}{\sqrt{1 - \frac{u^2}{c^2}}} = \gamma mc^2 \quad (39.26)$$

In many situations, the linear momentum or energy of a particle rather than its speed is measured. It is therefore useful to have an expression relating the total energy E to the relativistic linear momentum p , which is accomplished by using the expressions $E = \gamma mc^2$ and $p = \gamma mu$. By squaring these equations and subtracting, we can eliminate u (Problem 58). The result, after some algebra, is⁶

$$E^2 = p^2c^2 + (mc^2)^2 \quad (39.27)$$

When the particle is at rest, $p = 0$, so $E = E_R = mc^2$.

In Section 35.1, we introduced the concept of a particle of light, called a **photon**. For particles that have zero mass, such as photons, we set $m = 0$ in Equation 39.27 and find that

$$E = pc \quad (39.28)$$

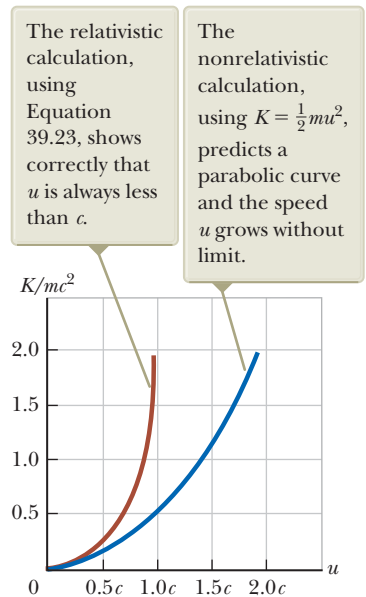


Figure 39.16 A graph comparing relativistic and nonrelativistic kinetic energy of a moving particle. The energies are plotted as a function of particle speed u .

◀ Total energy of a relativistic particle

◀ Energy–momentum relationship for a relativistic particle

⁶One way to remember this relationship is to draw a right triangle having a hypotenuse of length E and legs of lengths pc and mc^2 .

This equation is an exact expression relating total energy and linear momentum for photons, which always travel at the speed of light (in vacuum).

Finally, because the mass m of a particle is independent of its motion, m must have the same value in all reference frames. For this reason, m is often called the **invariant mass**. On the other hand, because the total energy and linear momentum of a particle both depend on velocity, these quantities depend on the reference frame in which they are measured.

When dealing with subatomic particles, it is convenient to express their energy in electron volts (Section 25.1) because the particles are usually given this energy by acceleration through a potential difference. The conversion factor, as you recall from Equation 25.5, is

$$1 \text{ eV} = 1.602 \times 10^{-19} \text{ J}$$

For example, the mass of an electron is $9.109 \times 10^{-31} \text{ kg}$. Hence, the rest energy of the electron is

$$\begin{aligned} m_e c^2 &= (9.109 \times 10^{-31} \text{ kg})(2.998 \times 10^8 \text{ m/s})^2 = 8.187 \times 10^{-14} \text{ J} \\ &= (8.187 \times 10^{-14} \text{ J})(1 \text{ eV}/1.602 \times 10^{-19} \text{ J}) = 0.511 \text{ MeV} \end{aligned}$$

- Quick Quiz 39.9** The following *pairs* of energies—particle 1: E , $2E$; particle 2: E , $3E$; particle 3: $2E$, $4E$ —represent the rest energy and total energy of three different particles. Rank the particles from greatest to least according to their
- (a) mass, (b) kinetic energy, and (c) speed.

Example 39.9 The Energy of a Speedy Proton

(A) Find the rest energy of a proton in units of electron volts.

SOLUTION

Conceptualize Even if the proton is not moving, it has energy associated with its mass. If it moves, the proton possesses more energy, with the total energy being the sum of its rest energy and its kinetic energy.

Categorize The phrase “rest energy” suggests we must take a relativistic rather than a classical approach to this problem.

Analyze Use Equation 39.24 to find the rest energy:

$$\begin{aligned} E_R &= m_p c^2 = (1.6726 \times 10^{-27} \text{ kg})(2.998 \times 10^8 \text{ m/s})^2 \\ &= (1.504 \times 10^{-10} \text{ J}) \left(\frac{1.00 \text{ eV}}{1.602 \times 10^{-19} \text{ J}} \right) = 938 \text{ MeV} \end{aligned}$$

(B) If the total energy of a proton is three times its rest energy, what is the speed of the proton?

SOLUTION

Use Equation 39.26 to relate the total energy of the proton to the rest energy:

$$E = 3m_p c^2 = \frac{m_p c^2}{\sqrt{1 - \frac{u^2}{c^2}}} \rightarrow 3 = \frac{1}{\sqrt{1 - \frac{u^2}{c^2}}}$$

Solve for u :

$$1 - \frac{u^2}{c^2} = \frac{1}{9} \rightarrow \frac{u^2}{c^2} = \frac{8}{9}$$

$$u = \frac{\sqrt{8}}{3} c = 0.943c = 2.83 \times 10^8 \text{ m/s}$$

(C) Determine the kinetic energy of the proton in units of electron volts.

▶ 39.9 continued

SOLUTION

Use Equation 39.25 to find the kinetic energy of the proton:

$$\begin{aligned} K &= E - m_p c^2 = 3m_p c^2 - m_p c^2 = 2m_p c^2 \\ &= 2(938 \text{ MeV}) = 1.88 \times 10^3 \text{ MeV} \end{aligned}$$

(D) What is the proton's momentum?

SOLUTION

Use Equation 39.27 to calculate the momentum:

$$\begin{aligned} E^2 &= p^2 c^2 + (m_p c^2)^2 = (3m_p c^2)^2 \\ p^2 c^2 &= 9(m_p c^2)^2 - (m_p c^2)^2 = 8(m_p c^2)^2 \\ p &= \sqrt{8} \frac{m_p c^2}{c} = \sqrt{8} \frac{938 \text{ MeV}}{c} = 2.65 \times 10^3 \text{ MeV}/c \end{aligned}$$

Finalize The unit of momentum in part (D) is written MeV/c, which is a common unit in particle physics. For comparison, you might want to solve this example using classical equations.

WHAT IF? In classical physics, if the momentum of a particle doubles, the kinetic energy increases by a factor of 4. What happens to the kinetic energy of the proton in this example if its momentum doubles?

Answer Based on what we have seen so far in relativity, it is likely you would predict that its kinetic energy does not increase by a factor of 4.

Find the new doubled momentum:

$$p_{\text{new}} = 2 \left(\sqrt{8} \frac{m_p c^2}{c} \right) = 4\sqrt{2} \frac{m_p c^2}{c}$$

Use this result in Equation 39.27 to find the new total energy:

$$\begin{aligned} E_{\text{new}}^2 &= p_{\text{new}}^2 c^2 + (m_p c^2)^2 \\ E_{\text{new}}^2 &= \left(4\sqrt{2} \frac{m_p c^2}{c} \right)^2 c^2 + (m_p c^2)^2 = 33(m_p c^2)^2 \\ E_{\text{new}} &= \sqrt{33} m_p c^2 = 5.7 m_p c^2 \end{aligned}$$

Use Equation 39.25 to find the new kinetic energy:

$$K_{\text{new}} = E_{\text{new}} - m_p c^2 = 5.7 m_p c^2 - m_p c^2 = 4.7 m_p c^2$$

This value is a little more than twice the kinetic energy found in part (C), not four times. In general, the factor by which the kinetic energy increases if the momentum doubles depends on the initial momentum, but it approaches 4 as the momentum approaches zero. In this latter situation, classical physics correctly describes the situation.

Equation 39.26, $E = \gamma m c^2$, represents the total energy of a particle. This important equation suggests that even when a particle is at rest ($\gamma = 1$), it still possesses enormous energy through its mass. The clearest experimental proof of the equivalence of mass and energy occurs in nuclear and elementary-particle interactions in which the conversion of mass into kinetic energy takes place. Consequently, we cannot use the principle of conservation of energy in relativistic situations as it was outlined in Chapter 8. We must modify the principle by including rest energy as another form of energy storage.

This concept is important in atomic and nuclear processes, in which the change in mass is a relatively large fraction of the initial mass. In a conventional nuclear reactor, for example, the uranium nucleus undergoes *fission*, a reaction that results in several lighter fragments having considerable kinetic energy. In the case of ^{235}U , which is used as fuel in nuclear power plants, the fragments are two lighter nuclei and a few neutrons. The total mass of the fragments is less than that of the ^{235}U by an amount Δm . The corresponding energy $\Delta m c^2$ associated with this mass difference is

exactly equal to the sum of the kinetic energies of the fragments. The kinetic energy is absorbed as the fragments move through water, raising the internal energy of the water. This internal energy is used to produce steam for the generation of electricity.

Next, consider a basic *fusion* reaction in which two deuterium atoms combine to form one helium atom. The decrease in mass that results from the creation of one helium atom from two deuterium atoms is $\Delta m = 4.25 \times 10^{-29}$ kg. Hence, the corresponding energy that results from one fusion reaction is $\Delta mc^2 = 3.83 \times 10^{-12}$ J = 23.9 MeV. To appreciate the magnitude of this result, consider that if only 1 g of deuterium were converted to helium, the energy released would be on the order of 10^{12} J! In 2013's cost of electrical energy, this energy would be worth approximately \$35 000. We shall present more details of these nuclear processes in Chapter 45 of the extended version of this textbook.

Example 39.10 Mass Change in a Radioactive Decay

The ^{216}Po nucleus is unstable and exhibits radioactivity (Chapter 44). It decays to ^{212}Pb by emitting an alpha particle, which is a helium nucleus, ^4He . The relevant masses, in atomic mass units (see Table A.1 in Appendix A), are $m_i = m(^{216}\text{Po}) = 216.001\,915$ u and $m_f = m(^{212}\text{Pb}) + m(^4\text{He}) = 211.991\,898$ u + 4.002 603 u.

(A) Find the mass change of the system in this decay.

SOLUTION

Conceptualize The initial system is the ^{216}Po nucleus. Imagine the mass of the system decreasing during the decay and transforming to kinetic energy of the alpha particle and the ^{212}Pb nucleus after the decay.

Categorize We use concepts discussed in this section, so we categorize this example as a substitution problem.

Calculate the change in mass using the mass values given in the problem statement.

$$\begin{aligned}\Delta m &= 216.001\,915\text{ u} - (211.991\,898\text{ u} + 4.002\,603\text{ u}) \\ &= 0.007\,414\text{ u} = 1.23 \times 10^{-29}\text{ kg}\end{aligned}$$

(B) Find the energy this mass change represents.

SOLUTION

Use Equation 39.24 to find the energy associated with this mass change:

$$\begin{aligned}E &= \Delta mc^2 = (1.23 \times 10^{-29}\text{ kg})(3.00 \times 10^8\text{ m/s})^2 \\ &= 1.11 \times 10^{-12}\text{ J} = 6.92\text{ MeV}\end{aligned}$$

39.9 The General Theory of Relativity

Up to this point, we have sidestepped a curious puzzle. Mass has two seemingly different properties: a *gravitational attraction* for other masses and an *inertial* property that represents a resistance to acceleration. We first discussed these two attributes for mass in Section 5.5. To designate these two attributes, we use the subscripts g and i and write

$$\text{Gravitational property: } F_g = m_g g$$

$$\text{Inertial property: } \sum F = m_i a$$

The value for the gravitational constant G was chosen to make the magnitudes of m_g and m_i numerically equal. Regardless of how G is chosen, however, the strict proportionality of m_g and m_i has been established experimentally to an extremely high degree: a few parts in 10^{12} . Therefore, it appears that gravitational mass and inertial mass may indeed be exactly proportional.

Why, though? They seem to involve two entirely different concepts: a force of mutual gravitational attraction between two masses and the resistance of a single mass to being accelerated. This question, which puzzled Newton and many other physicists over the years, was answered by Einstein in 1916 when he published his theory of gravitation, known as the *general theory of relativity*. Because it is a mathematically complex theory, we offer merely a hint of its elegance and insight.

In Einstein's view, the dual behavior of mass was evidence for a very intimate and basic connection between the two behaviors. He pointed out that no mechanical experiment (such as dropping an object) could distinguish between the two situations illustrated in Figures 39.17a and 39.17b. In Figure 39.17a, a person standing in an elevator on the surface of a planet feels pressed into the floor due to the gravitational force. If he releases his briefcase, he observes it moving toward the floor with acceleration $\vec{g} = -g\hat{j}$. In Figure 39.17b, the person is in an elevator in empty space accelerating upward with $\vec{a}_{\text{el}} = +g\hat{j}$. The person feels pressed into the floor with the same force as in Figure 39.17a. If he releases his briefcase, he observes it moving toward the floor with acceleration g , exactly as in the previous situation. In each situation, an object released by the observer undergoes a downward acceleration of magnitude g relative to the floor. In Figure 39.17a, the person is at rest in an inertial frame in a gravitational field due to the planet. In Figure 39.17b, the person is in a noninertial frame accelerating in gravity-free space. Einstein's claim is that these two situations are completely equivalent.

Einstein carried this idea further and proposed that *no* experiment, mechanical or otherwise, could distinguish between the two situations. This extension to include all phenomena (not just mechanical ones) has interesting consequences. For example, suppose a light pulse is sent horizontally across the elevator as in Figure 39.17c, in which the elevator is accelerating upward in empty space. From the point of view of an observer in an inertial frame outside the elevator, the light travels in a straight line while the floor of the elevator accelerates upward. According to the observer on the elevator, however, the trajectory of the light pulse bends downward as the floor of the elevator (and the observer) accelerates upward. Therefore, based on the equality of parts (a) and (b) of the figure, Einstein proposed that a

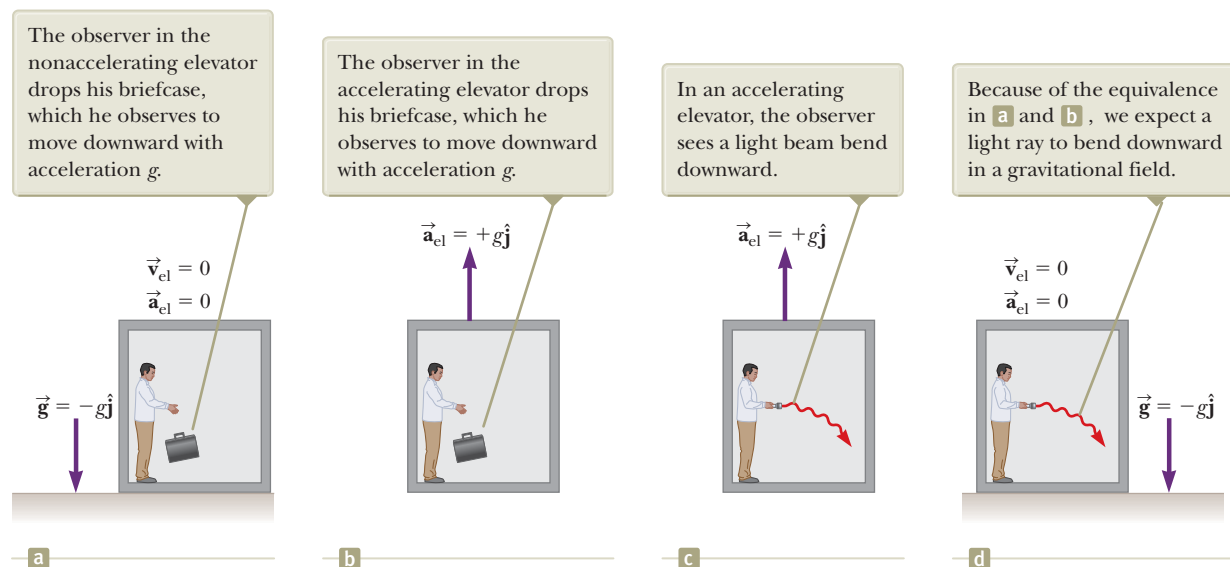


Figure 39.17 (a) The observer is at rest in an elevator in a uniform gravitational field $\vec{g} = -g\hat{j}$, directed downward. (b) The observer is in a region where gravity is negligible, but the elevator moves upward with an acceleration $\vec{a}_{\text{el}} = +g\hat{j}$. According to Einstein, the frames of reference in (a) and (b) are equivalent in every way. No local experiment can distinguish any difference between the two frames. (c) An observer watches a beam of light in an accelerating elevator. (d) Einstein's prediction of the behavior of a beam of light in a gravitational field.

beam of light should also be bent downward by a gravitational field as in Figure 39.17d. Experiments have verified the effect, although the bending is small. A laser aimed at the horizon falls less than 1 cm after traveling 6 000 km. (No such bending is predicted in Newton's theory of gravitation.)

Einstein's **general theory of relativity** has two postulates:


- All the laws of nature have the same form for observers in any frame of reference, whether accelerated or not.
- In the vicinity of any point, a gravitational field is equivalent to an accelerated frame of reference in gravity-free space (the **principle of equivalence**).

One interesting effect predicted by the general theory is that time is altered by gravity. A clock in the presence of gravity runs slower than one located where gravity is negligible. Consequently, the frequencies of radiation emitted by atoms in the presence of a strong gravitational field are *redshifted* to lower frequencies when compared with the same emissions in the presence of a weak field. This gravitational redshift has been detected in spectral lines emitted by atoms in massive stars. It has also been verified on the Earth by comparing the frequencies of gamma rays emitted from nuclei separated vertically by about 20 m.

The second postulate suggests a gravitational field may be “transformed away” at any point if we choose an appropriate accelerated frame of reference, a freely falling one. Einstein developed an ingenious method of describing the acceleration necessary to make the gravitational field “disappear.” He specified a concept, the *curvature of space–time*, that describes the gravitational effect at every point. In fact, the curvature of space–time completely replaces Newton's gravitational theory. According to Einstein, there is no such thing as a gravitational force. Rather, the presence of a mass causes a curvature of space–time in the vicinity of the mass, and this curvature dictates the space–time path that all freely moving objects must follow.

As an example of the effects of curved space–time, imagine two travelers moving on parallel paths a few meters apart on the surface of the Earth and maintaining an exact northward heading along two longitude lines. As they observe each other near the equator, they will claim that their paths are exactly parallel. As they approach the North Pole, however, they notice that they are moving closer together and will meet at the North Pole. Therefore, they claim that they moved along parallel paths, but moved toward each other, *as if there were an attractive force between them*. The travelers make this conclusion based on their everyday experience of moving on flat surfaces. From our mental representation, however, we realize they are walking on a curved surface, and it is the geometry of the curved surface, rather than an attractive force, that causes them to converge. In a similar way, general relativity replaces the notion of forces with the movement of objects through curved space–time.

One prediction of the general theory of relativity is that a light ray passing near the Sun should be deflected in the curved space–time created by the Sun's mass. This prediction was confirmed when astronomers detected the bending of starlight near the Sun during a total solar eclipse that occurred shortly after World War I (Fig. 39.18). When this discovery was announced, Einstein became an international celebrity.



Courtesy of NASA

Einstein's cross. The four outer bright spots are images of the same galaxy that have been bent around a massive object located between the galaxy and the Earth. The massive object acts like a lens, causing the rays of light that were diverging from the distant galaxy to converge on the Earth. (If the intervening massive object had a uniform mass distribution, we would see a bright ring instead of four spots.)

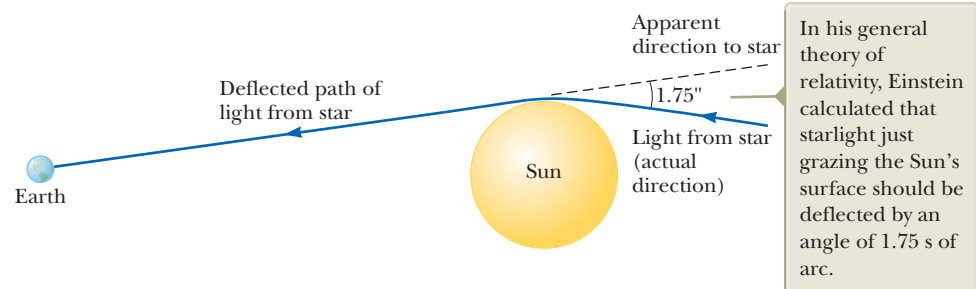


Figure 39.18 Deflection of starlight passing near the Sun. Because of this effect, the Sun or some other remote object can act as a *gravitational lens*.

If the concentration of mass becomes very great as is believed to occur when a large star exhausts its nuclear fuel and collapses to a very small volume, a **black hole** may form as discussed in Chapter 13. Here, the curvature of space–time is so extreme that within a certain distance from the center of the black hole all matter and light become trapped as discussed in Section 13.6.

Summary

Definitions

The relativistic expression for the **linear momentum** of a particle moving with a velocity \vec{u} is

$$\vec{p} \equiv \frac{m\vec{u}}{\sqrt{1 - \frac{u^2}{c^2}}} = \gamma m\vec{u} \quad (39.19)$$

The relativistic force \vec{F} acting on a particle whose linear momentum is \vec{p} is defined as

$$\vec{F} \equiv \frac{d\vec{p}}{dt} \quad (39.20)$$

Concepts and Principles

The two basic postulates of the special theory of relativity are as follows:

- The laws of physics must be the same in all inertial reference frames.
- The speed of light in vacuum has the same value, $c = 3.00 \times 10^8$ m/s, in all inertial frames, regardless of the velocity of the observer or the velocity of the source emitting the light.

Three consequences of the special theory of relativity are as follows:

- Events that are measured to be simultaneous for one observer are not necessarily measured to be simultaneous for another observer who is in motion relative to the first.
- Clocks in motion relative to an observer are measured to run slower by a factor $\gamma = (1 - v^2/c^2)^{-1/2}$. This phenomenon is known as **time dilation**.
- The lengths of objects in motion are measured to be shorter in the direction of motion by a factor $1/\gamma = (1 - v^2/c^2)^{1/2}$. This phenomenon is known as **length contraction**.

To satisfy the postulates of special relativity, the Galilean transformation equations must be replaced by the **Lorentz transformation equations**:

$$x' = \gamma(x - vt) \quad y' = y \quad z' = z \quad t' = \gamma\left(t - \frac{v}{c^2}x\right) \quad (39.11)$$

where $\gamma = (1 - v^2/c^2)^{-1/2}$ and the S' frame moves in the x direction at speed v relative to the S frame.

The relativistic form of the **Lorentz velocity transformation equation** is

$$u'_x = \frac{u_x - v}{1 - \frac{u_x v}{c^2}} \quad (39.16)$$

where u'_x is the x component of the velocity of an object as measured in the S' frame and u_x is its component as measured in the S frame.

The relativistic expression for the **kinetic energy** of a particle is

$$K = \frac{mc^2}{\sqrt{1 - \frac{u^2}{c^2}}} - mc^2 = (\gamma - 1)mc^2 \quad (39.23)$$

The constant term mc^2 in Equation 39.23 is called the **rest energy** E_R of the particle:

$$E_R = mc^2 \quad (39.24)$$

The **total energy** E of a particle is given by

$$E = \frac{mc^2}{\sqrt{1 - \frac{u^2}{c^2}}} = \gamma mc^2 \quad (39.26)$$

The relativistic linear momentum of a particle is related to its total energy through the equation

$$E^2 = p^2 c^2 + (mc^2)^2 \quad (39.27)$$

Objective Questions

1. denotes answer available in *Student Solutions Manual/Study Guide*

- (i) Does the speed of an electron have an upper limit? (a) yes, the speed of light c (b) yes, with another value (c) no (ii) Does the magnitude of an electron's momentum have an upper limit? (a) yes, $m_e c$ (b) yes, with another value (c) no (iii) Does the electron's kinetic energy have an upper limit? (a) yes, $m_e c^2$ (b) yes, $\frac{1}{2} m_e c^2$ (c) yes, with another value (d) no
- A spacecraft zooms past the Earth with a constant velocity. An observer on the Earth measures that an undamaged clock on the spacecraft is ticking at one-third the rate of an identical clock on the Earth. What does an observer on the spacecraft measure about the Earth-based clock's ticking rate? (a) It runs more than three times faster than his own clock. (b) It runs three times faster than his own. (c) It runs at the same rate as his own. (d) It runs at one-third the rate of his own. (e) It runs at less than one-third the rate of his own.
- As a car heads down a highway traveling at a speed v away from a ground observer, which of the following statements are true about the measured speed of the light beam from the car's headlights? More than one statement may be correct. (a) The ground observer measures the light speed to be $c + v$. (b) The driver measures the light speed to be c . (c) The ground observer measures the light speed to be c . (d) The driver measures the light speed to be $c - v$. (e) The ground observer measures the light speed to be $c - v$.
- A spacecraft built in the shape of a sphere moves past an observer on the Earth with a speed of $0.500c$. What shape does the observer measure for the spacecraft as it goes by? (a) a sphere (b) a cigar shape, elongated along the direction of motion (c) a round pillow shape, flattened along the direction of motion (d) a conical shape, pointing in the direction of motion
- An astronaut is traveling in a spacecraft in outer space in a straight line at a constant speed of $0.500c$. Which of the following effects would she experience? (a) She would feel heavier. (b) She would find it harder to breathe. (c) Her heart rate would change. (d) Some of the dimensions of her spacecraft would be shorter. (e) None of those answers is correct.
- You measure the volume of a cube at rest to be V_0 . You then measure the volume of the same cube as it passes you in a direction parallel to one side of the cube. The speed of the cube is $0.980c$, so $\gamma \approx 5$. Is the volume you measure close to (a) $V_0/25$, (b) $V_0/5$, (c) V_0 , (d) $5V_0$, or (e) $25V_0$?
- Two identical clocks are set side by side and synchronized. One remains on the Earth. The other is put into orbit around the Earth moving rapidly toward the east. (i) As measured by an observer on the Earth, does the orbiting clock (a) run faster than the Earth-based clock, (b) run at the same rate, or (c) run slower? (ii) The orbiting clock is returned to its original location and brought to rest relative to the Earth-based clock. Thereafter, what happens? (a) Its reading lags farther and farther behind the Earth-based clock. (b) It lags behind the Earth-based clock by a constant amount. (c) It is synchronous with the Earth-based clock. (d) It is ahead of the Earth-based clock by a constant amount. (e) It gets farther and farther ahead of the Earth-based clock.
- The following three particles all have the same total energy E : (a) a photon, (b) a proton, and (c) an electron. Rank the magnitudes of the particles' momenta from greatest to smallest.
- Which of the following statements are fundamental postulates of the special theory of relativity? More than one statement may be correct. (a) Light moves through a substance called the ether. (b) The speed of light depends on the inertial reference frame in which it is measured. (c) The laws of physics depend on the inertial reference frame in which they are used. (d) The laws of physics are the same in all inertial reference frames. (e) The speed of light is independent of the inertial reference frame in which it is measured.
- A distant astronomical object (a quasar) is moving away from us at half the speed of light. What is the speed of the light we receive from this quasar? (a) greater than c (b) c (c) between $c/2$ and c (d) $c/2$ (e) between 0 and $c/2$

Conceptual Questions

1. denotes answer available in *Student Solutions Manual/Study Guide*

- In several cases, a nearby star has been found to have a large planet orbiting about it, although light from the planet could not be seen separately from the starlight. Using the ideas of a system rotating about its center of mass and of the Doppler shift for light, explain how an astronomer could determine the presence of the invisible planet.
- Explain why, when defining the length of a rod, it is necessary to specify that the positions of the ends of the rod are to be measured simultaneously.
- A train is approaching you at very high speed as you stand next to the tracks. Just as an observer on the train passes you, you both begin to play the same recorded version of a Beethoven symphony on identical iPods. (a) According to you, whose iPod finishes the symphony first? (b) **What If?** According to the observer on the train, whose iPod finishes the symphony first? (c) Whose iPod actually finishes the symphony first?
- List three ways our day-to-day lives would change if the speed of light were only 50 m/s.
- How is acceleration indicated on a space-time graph?
- (a) "Newtonian mechanics correctly describes objects moving at ordinary speeds, and relativistic mechanics correctly describes objects moving very fast." (b) "Relativistic mechanics must make a smooth transition as

it reduces to Newtonian mechanics in a case in which the speed of an object becomes small compared with the speed of light.” Argue for or against statements (a) and (b).

7. The speed of light in water is 230 Mm/s. Suppose an electron is moving through water at 250 Mm/s. Does that violate the principle of relativity? Explain.
8. A particle is moving at a speed less than $c/2$. If the speed of the particle is doubled, what happens to its momentum?
9. Give a physical argument that shows it is impossible to accelerate an object of mass m to the speed of light, even with a continuous force acting on it.
10. Explain how the Doppler effect with microwaves is used to determine the speed of an automobile.
11. It is said that Einstein, in his teenage years, asked the question, “What would I see in a mirror if I carried it in my hands and ran at a speed near that of light?” How would you answer this question?
12. (i) An object is placed at a position $p > f$ from a concave mirror as shown in Figure CQ39.12a, where f is the focal length of the mirror. In a finite time interval, the object is moved to the right to a position at the focal point F of the mirror. Show that the image of the object moves at a speed greater than the speed of

light. (ii) A laser pointer is suspended in a horizontal plane and set into rapid rotation as shown in Figure CQ39.12b. Show that the spot of light it produces on a distant screen can move across the screen at a speed greater than the speed of light. (If you carry out this experiment, make sure the direct laser light cannot enter a person’s eyes.) (iii) Argue that the experiments in parts (i) and (ii) do not invalidate the principle that no material, no energy, and no information can move faster than light moves in a vacuum.

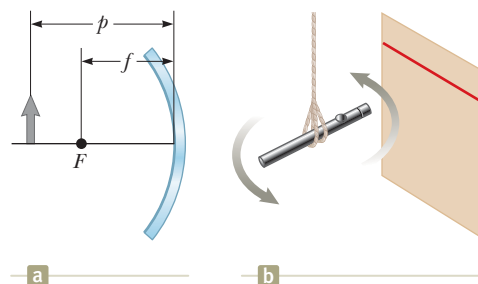


Figure CQ39.12

13. With regard to reference frames, how does general relativity differ from special relativity?
14. Two identical clocks are in the same house, one upstairs in a bedroom and the other downstairs in the kitchen. Which clock runs slower? Explain.

Problems



The problems found in this chapter may be assigned online in Enhanced WebAssign

1. straightforward; 2. intermediate; 3. challenging

1. full solution available in the Student Solutions Manual/Study Guide

AMT Analysis Model tutorial available in Enhanced WebAssign

GP Guided Problem

M Master It tutorial available in Enhanced WebAssign

W Watch It video solution available in Enhanced WebAssign

Section 39.1 The Principle of Galilean Relativity

Problems 46–48, 50, 51, 53–54, and 79 in Chapter 4 can be assigned with this section.

1. The truck in Figure P39.1 is moving at a speed of 10.0 m/s relative to the ground. The person on the truck throws a baseball in the backward direction at a speed of 20.0 m/s relative to the truck. What is the velocity of the baseball as measured by the observer on the ground?

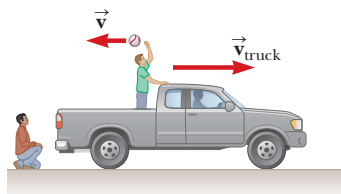


Figure P39.1

2. In a laboratory frame of reference, an observer notes that Newton’s second law is valid. Assume forces and masses are measured to be the same in any reference frame for speeds small compared with the speed of light. (a) Show that Newton’s second law is also valid for an observer moving at a constant speed, small compared with the speed of light, relative to the laboratory frame. (b) Show that Newton’s second law is *not* valid in a reference frame moving past the laboratory frame with a constant acceleration.

3. The speed of the Earth in its orbit is 29.8 km/s. If that is the magnitude of the velocity \vec{v} of the ether wind in Figure P39.3, find the angle ϕ between the velocity of light \vec{c} in vacuum and the resultant velocity of light if there were an ether.

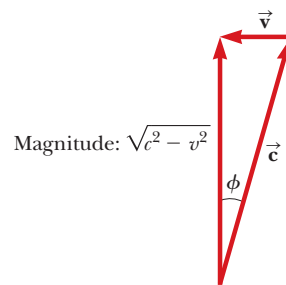


Figure P39.3

- 4.** A car of mass 2 000 kg moving with a speed of 20.0 m/s collides and locks together with a 1 500-kg car at rest at a stop sign. Show that momentum is conserved in a reference frame moving at 10.0 m/s in the direction of the moving car.

Section 39.2 The Michelson–Morley Experiment

Section 39.3 Einstein's Principle of Relativity

Section 39.4 Consequences of the Special Theory of Relativity

Problem 82 in Chapter 4 can be assigned with this section.

- 5.** A star is 5.00 ly from the Earth. At what speed must a spacecraft travel on its journey to the star such that the Earth–star distance measured in the frame of the spacecraft is 2.00 ly?
- 6.** A meterstick moving at $0.900c$ relative to the Earth's surface approaches an observer at rest with respect to the Earth's surface. (a) What is the meterstick's length as measured by the observer? (b) Qualitatively, how would the answer to part (a) change if the observer started running toward the meterstick?
- 7.** At what speed does a clock move if it is measured to run at a rate one-half the rate of a clock at rest with respect to an observer?
- 8.** A muon formed high in the Earth's atmosphere is measured by an observer on the Earth's surface to travel at speed $v = 0.990c$ for a distance of 4.60 km before it decays into an electron, a neutrino, and an antineutrino ($\mu^- \rightarrow e^- + \nu + \bar{\nu}$). (a) For what time interval does the muon live as measured in its reference frame? (b) How far does the Earth travel as measured in the frame of the muon?
- 9.** How fast must a meterstick be moving if its length is measured to shrink to 0.500 m?
- 10.** An astronaut is traveling in a space vehicle moving at $0.500c$ relative to the Earth. The astronaut measures her pulse rate at 75.0 beats per minute. Signals generated by the astronaut's pulse are radioed to the Earth when the vehicle is moving in a direction perpendicular to the line that connects the vehicle with an observer on the Earth. (a) What pulse rate does the Earth-based observer measure? (b) **What If?** What would be the pulse rate if the speed of the space vehicle were increased to $0.990c$?
- 11.** A physicist drives through a stop light. When he is pulled over, he tells the police officer that the Doppler shift made the red light of wavelength 650 nm appear green to him, with a wavelength of 520 nm. The police officer writes out a traffic citation for speeding. How fast was the physicist traveling, according to his own testimony?
- 12.** A fellow astronaut passes by you in a spacecraft traveling at a high speed. The astronaut tells you that his craft is 20.0 m long and that the identical craft you are sitting in is 19.0 m long. According to your observations, (a) how long is your craft, (b) how long is the astronaut's craft, and (c) what is the speed of the astronaut's craft relative to your craft?
- 13.** A deep-space vehicle moves away from the Earth with a speed of $0.800c$. An astronaut on the vehicle measures a time interval of 3.00 s to rotate her body through 1.00 rev as she floats in the vehicle. What time interval is required for this rotation according to an observer on the Earth?
- 14.** For what value of v does $\gamma = 1.010$? Observe that for speeds lower than this value, time dilation and length contraction are effects amounting to less than 1%.
- 15.** A supertrain with a proper length of 100 m travels at a speed of $0.950c$ as it passes through a tunnel having a proper length of 50.0 m. As seen by a trackside observer, is the train ever completely within the tunnel? If so, by how much do the train's ends clear the ends of the tunnel?
- 16.** The average lifetime of a pi meson in its own frame of reference (i.e., the proper lifetime) is 2.6×10^{-8} s. If the meson moves with a speed of $0.98c$, what is (a) its mean lifetime as measured by an observer on Earth, and (b) the average distance it travels before decaying, as measured by an observer on Earth? (c) What distance would it travel if time dilation did not occur?
- 17.** An astronomer on the Earth observes a meteoroid in the southern sky approaching the Earth at a speed of $0.800c$. At the time of its discovery the meteoroid is 20.0 ly from the Earth. Calculate (a) the time interval required for the meteoroid to reach the Earth as measured by the Earthbound astronomer, (b) this time interval as measured by a tourist on the meteoroid, and (c) the distance to the Earth as measured by the tourist.
- 18.** A cube of steel has a volume of 1.00 cm^3 and a mass of 8.00 g when at rest on the Earth. If this cube is now given a speed $u = 0.900c$, what is its density as measured by a stationary observer? Note that relativistic density is defined as E_R/c^2V .
- 19.** A spacecraft with a proper length of 300 m passes by an observer on the Earth. According to this observer, it takes $0.750 \mu\text{s}$ for the spacecraft to pass a fixed point. Determine the speed of the spacecraft as measured by the Earth-based observer.
- 20.** A spacecraft with a proper length of L_p passes by an observer on the Earth. According to this observer, it takes a time interval Δt for the spacecraft to pass a fixed point. Determine the speed of the object as measured by the Earth-based observer.
- 21.** A light source recedes from an observer with a speed v_s that is small compared with c . (a) Show that the fractional shift in the measured wavelength is given by the approximate expression
- $$\frac{\Delta\lambda}{\lambda} \approx \frac{v_s}{c}$$
- This phenomenon is known as the *redshift* because the visible light is shifted toward the red. (b) Spectroscopic measurements of light at $\lambda = 397 \text{ nm}$ coming from a galaxy in Ursa Major reveal a redshift of 20.0 nm. What is the recessional speed of the galaxy?

22. **Review.** In 1963, astronaut Gordon Cooper orbited the Earth 22 times. The press stated that for each orbit, he aged two-millionths of a second less than he would have had he remained on the Earth. (a) Assuming Cooper was 160 km above the Earth in a circular orbit, determine the difference in elapsed time between someone on the Earth and the orbiting astronaut for the 22 orbits. You may use the approximation

$$\frac{1}{\sqrt{1-x}} \approx 1 + \frac{x}{2}$$

for small x . (b) Did the press report accurate information? Explain.

23. Police radar detects the speed of a car (Fig. P39.23) as follows. Microwaves of a precisely known frequency are broadcast toward the car. The moving car reflects the microwaves with a Doppler shift. The reflected waves are received and combined with an attenuated version of the transmitted wave. Beats occur between the two microwave signals. The beat frequency is measured. (a) For an electromagnetic wave reflected back to its source from a mirror approaching at speed v , show that the reflected wave has frequency

$$f' = \frac{c+v}{c-v} f$$

where f is the source frequency. (b) Noting that v is much less than c , show that the beat frequency can be written as $f_{\text{beat}} = 2v/\lambda$. (c) What beat frequency is measured for a car speed of 30.0 m/s if the microwaves have frequency 10.0 GHz? (d) If the beat frequency measurement in part (c) is accurate to ± 5.0 Hz, how accurate is the speed measurement?



Figure P39.23

24. The identical twins Speedo and Goslo join a migration from the Earth to Planet X, 20.0 ly away in a reference frame in which both planets are at rest. The twins, of the same age, depart at the same moment on different spacecraft. Speedo's spacecraft travels steadily at $0.950c$ and Goslo's at $0.750c$. (a) Calculate the age difference between the twins after Goslo's spacecraft lands on Planet X. (b) Which twin is older?
25. An atomic clock moves at 1 000 km/h for 1.00 h as measured by an identical clock on the Earth. At the

end of the 1.00-h interval, how many nanoseconds slow will the moving clock be compared with the Earth-based clock?

26. **Review.** An alien civilization occupies a planet circling a brown dwarf, several light-years away. The plane of the planet's orbit is perpendicular to a line from the brown dwarf to the Sun, so the planet is at nearly a fixed position relative to the Sun. The extraterrestrials have come to love broadcasts of *MacGyver*, on television channel 2, at carrier frequency 57.0 MHz. Their line of sight to us is in the plane of the Earth's orbit. Find the difference between the highest and lowest frequencies they receive due to the Earth's orbital motion around the Sun.

Section 39.5 The Lorentz Transformation Equations

27. A red light flashes at position $x_R = 3.00$ m and time $t_R = 1.00 \times 10^{-9}$ s, and a blue light flashes at $x_B = 5.00$ m and $t_B = 9.00 \times 10^{-9}$ s, all measured in the S reference frame. Reference frame S' moves uniformly to the right and has its origin at the same point as S at $t = t' = 0$. Both flashes are observed to occur at the same place in S'. (a) Find the relative speed between S and S'. (b) Find the location of the two flashes in frame S'. (c) At what time does the red flash occur in the S' frame?

28. Shannon observes two light pulses to be emitted from the same location, but separated in time by $3.00 \mu\text{s}$. Kimmie observes the emission of the same two pulses to be separated in time by $9.00 \mu\text{s}$. (a) How fast is Kimmie moving relative to Shannon? (b) According to Kimmie, what is the separation in space of the two pulses?

29. A moving rod is observed to have a length of $\ell = 2.00$ m and to be oriented at an angle of $\theta = 30.0^\circ$ with respect to the direction of motion as shown in Figure P39.29. The rod has a speed of $0.995c$. (a) What is the proper length of the rod? (b) What is the orientation angle in the proper frame?

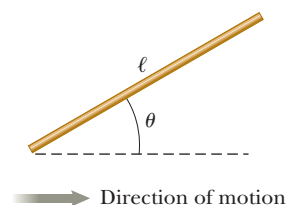


Figure P39.29

30. A rod moving with a speed v along the horizontal direction is observed to have length ℓ and to make an angle θ with respect to the direction of motion as shown in Figure P39.29. (a) Show that the length of the rod as measured by an observer at rest with respect to the rod is $\ell_p = \ell[1 - (v^2/c^2) \cos^2 \theta]^{1/2}$. (b) Show that the angle θ_p that the rod makes with the x axis according to an observer at rest with respect to the rod can be found from $\tan \theta_p = \gamma \tan \theta$. These results show that the rod is observed to be both contracted and rotated. (Take the lower end of the rod to be at the origin of the coordinate system in which the rod is at rest.)
31. Keilah, in reference frame S, measures two events to be simultaneous. Event A occurs at the point (50.0 m, 0, 0) at the instant 9:00:00 Universal time on January 15,

2013. Event B occurs at the point (150 m, 0, 0) at the same moment. Torrey, moving past with a velocity of $0.800c\hat{i}$, also observes the two events. In her reference frame S' , which event occurred first and what time interval elapsed between the events?

Section 39.6 The Lorentz Velocity Transformation Equations

32. Figure P39.32 shows a jet of material (at the upper right) being ejected by galaxy M87 (at the lower left). Such jets are believed to be evidence of supermassive black holes at the center of a galaxy. Suppose two jets of material from the center of a galaxy are ejected in opposite directions. Both jets move at $0.750c$ relative to the galaxy center. Determine the speed of one jet relative to the other.




Figure P39.32

33. An enemy spacecraft moves away from the Earth at a speed of $v = 0.800c$ (Fig. P39.33). A galactic patrol spacecraft pursues at a speed of $u = 0.900c$ relative to the Earth. Observers on the Earth measure the patrol spacecraft to be overtaking the enemy craft at a relative speed of $0.100c$. With what speed is the patrol craft overtaking the enemy craft as measured by the patrol craft's crew?

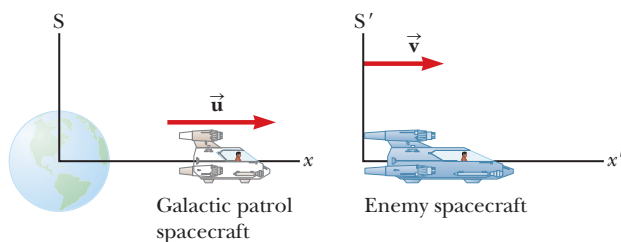


Figure P39.33

34. A spacecraft is launched from the surface of the Earth with a velocity of $0.600c$ at an angle of 50.0° above the horizontal positive x axis. Another spacecraft is moving past with a velocity of $0.700c$ in the negative x direction. Determine the magnitude and direction of the velocity of the first spacecraft as measured by the pilot of the second spacecraft.

35. A rocket moves with a velocity of $0.92c$ to the right with respect to a stationary observer A . An observer B moving relative to observer A finds that the rocket is moving with a velocity of $0.95c$ to the left. What is the velocity of observer B relative to observer A ? (*Hint:*

Consider observer B 's velocity in the frame of reference of the rocket.)

Section 39.7 Relativistic Linear Momentum

36. Calculate the momentum of an electron moving with a speed of (a) $0.0100c$, (b) $0.500c$, and (c) $0.900c$.

37. An electron has a momentum that is three times larger than its classical momentum. (a) Find the speed of the electron. (b) **What If?** How would your result change if the particle were a proton?

38. Show that the speed of an object having momentum of magnitude p and mass m is

$$u = \frac{c}{\sqrt{1 + (mc/p)^2}}$$

39. (a) Calculate the classical momentum of a proton traveling at $0.990c$, neglecting relativistic effects. (b) Repeat the calculation while including relativistic effects. (c) Does it make sense to neglect relativity at such speeds?

40. The speed limit on a certain roadway is 90.0 km/h. Suppose speeding fines are made proportional to the amount by which a vehicle's momentum exceeds the momentum it would have when traveling at the speed limit. The fine for driving at 190 km/h (that is, 100 km/h over the speed limit) is \$80.0. What, then, is the fine for traveling (a) at 1 090 km/h? (b) At 1 000 000 090 km/h?

41. A golf ball travels with a speed of 90.0 m/s. By what fraction does its relativistic momentum magnitude p differ from its classical value mu ? That is, find the ratio $(p - mu)/mu$.

42. The nonrelativistic expression for the momentum of a particle, $p = mu$, agrees with experiment if $u \ll c$. For what speed does the use of this equation give an error in the measured momentum of (a) 1.00% and (b) 10.0%?

43. An unstable particle at rest spontaneously breaks into two fragments of unequal mass. The mass of the first fragment is 2.50×10^{-28} kg, and that of the other is 1.67×10^{-27} kg. If the lighter fragment has a speed of $0.893c$ after the breakup, what is the speed of the heavier fragment?

Section 39.8 Relativistic Energy

44. Determine the energy required to accelerate an electron from (a) $0.500c$ to $0.900c$ and (b) $0.900c$ to $0.990c$.

45. An electron has a kinetic energy five times greater than its rest energy. Find (a) its total energy and (b) its speed.

46. Protons in an accelerator at the Fermi National Laboratory near Chicago are accelerated to a total energy that is 400 times their rest energy. (a) What is the speed of these protons in terms of c ? (b) What is their kinetic energy in MeV?

47. A proton moves at $0.950c$. Calculate its (a) rest energy, (b) total energy, and (c) kinetic energy.

48. (a) Find the kinetic energy of a 78.0-kg spacecraft launched out of the solar system with speed 106 km/s

- by using the classical equation $K = \frac{1}{2}mu^2$. (b) **What If?** Calculate its kinetic energy using the relativistic equation. (c) Explain the result of comparing the answers of parts (a) and (b).
- 49.** A proton in a high-energy accelerator moves with a speed of $c/2$. Use the work–kinetic energy theorem to find the work required to increase its speed to (a) $0.750c$ and (b) $0.995c$.
- 50.** Show that for any object moving at less than one-tenth the speed of light, the relativistic kinetic energy agrees with the result of the classical equation $K = \frac{1}{2}mu^2$ to within less than 1%. Therefore, for most purposes, the classical equation is sufficient to describe these objects.
- 51.** The total energy of a proton is twice its rest energy. Find the momentum of the proton in MeV/c units.
- 52.** Consider electrons accelerated to a total energy of 20.0 GeV in the 3.00-km-long Stanford Linear Accelerator. (a) What is the factor γ for the electrons? (b) What is the electrons' speed at the given energy? (c) What is the length of the accelerator in the electrons' frame of reference when they are moving at their highest speed?
- 53.** When 1.00 g of hydrogen combines with 8.00 g of oxygen, 9.00 g of water is formed. During this chemical reaction, 2.86×10^5 J of energy is released. (a) Is the mass of the reactants larger or smaller than the mass of the products? (b) What is the difference in mass? (c) Explain whether the change in mass is likely to be detectable.
- 54.** In a nuclear power plant, the fuel rods last 3 yr before they are replaced. The plant can transform energy at a maximum possible rate of 1.00 GW. Supposing it operates at 80.0% capacity for 3.00 yr, what is the loss of mass of the fuel?
- 55.** The power output of the Sun is 3.85×10^{26} W. By how much does the mass of the Sun decrease each second?
- 56.** A gamma ray (a high-energy photon) can produce an electron (e^-) and a positron (e^+) of equal mass when it enters the electric field of a heavy nucleus: $\gamma \rightarrow e^+ + e^-$. What minimum gamma-ray energy is required to accomplish this task?
- 57.** A spaceship of mass 2.40×10^6 kg is to be accelerated to a speed of $0.700c$. (a) What minimum amount of energy does this acceleration require from the spaceship's fuel, assuming perfect efficiency? (b) How much fuel would it take to provide this much energy if all the rest energy of the fuel could be transformed to kinetic energy of the spaceship?
- 58.** Show that the energy–momentum relationship in Equation 39.27, $E^2 = p^2c^2 + (mc^2)^2$, follows from the expressions $E = \gamma mc^2$ and $p = \gamma mu$.
- 59.** The rest energy of an electron is 0.511 MeV. The rest energy of a proton is 938 MeV. Assume both particles have kinetic energies of 2.00 MeV. Find the speed of (a) the electron and (b) the proton. (c) By what factor does the speed of the electron exceed that of the proton? (d) Repeat the calculations in parts (a) through (c) assuming both particles have kinetic energies of 2 000 MeV.
- 60.** Consider a car moving at highway speed u . Is its actual kinetic energy larger or smaller than $\frac{1}{2}mu^2$? Make an order-of-magnitude estimate of the amount by which its actual kinetic energy differs from $\frac{1}{2}mu^2$. In your solution, state the quantities you take as data and the values you measure or estimate for them. You may find Appendix B.5 useful.
- 61.** A pion at rest ($m_\pi = 273m_e$) decays to a muon ($m_\mu = 207m_e$) and an antineutrino ($m_{\bar{\nu}} \approx 0$). The reaction is written $\pi^- \rightarrow \mu^- + \bar{\nu}$. Find (a) the kinetic energy of the muon and (b) the energy of the antineutrino in electron volts.
- 62.** An unstable particle with mass $m = 3.34 \times 10^{-27}$ kg is initially at rest. The particle decays into two fragments that fly off along the x axis with velocity components $u_1 = 0.987c$ and $u_2 = -0.868c$. From this information, we wish to determine the masses of fragments 1 and 2. (a) Is the initial system of the unstable particle, which becomes the system of the two fragments, isolated or nonisolated? (b) Based on your answer to part (a), what two analysis models are appropriate for this situation? (c) Find the values of γ for the two fragments after the decay. (d) Using one of the analysis models in part (b), find a relationship between the masses m_1 and m_2 of the fragments. (e) Using the second analysis model in part (b), find a second relationship between the masses m_1 and m_2 . (f) Solve the relationships in parts (d) and (e) simultaneously for the masses m_1 and m_2 .
- 63.** Massive stars ending their lives in supernova explosions produce the nuclei of all the atoms in the bottom half of the periodic table by fusion of smaller nuclei. This problem roughly models that process. A particle of mass $m = 1.99 \times 10^{-26}$ kg moving with a velocity $\vec{u} = 0.500c\hat{i}$ collides head-on and sticks to a particle of mass $m' = m/3$ moving with the velocity $\vec{u}' = -0.500c\hat{i}$. What is the mass of the resulting particle?
- 64.** Massive stars ending their lives in supernova explosions produce the nuclei of all the atoms in the bottom half of the periodic table by fusion of smaller nuclei. This problem roughly models that process. A particle of mass m moving along the x axis with a velocity component $+u$ collides head-on and sticks to a particle of mass $m/3$ moving along the x axis with the velocity component $-u$. (a) What is the mass M of the resulting particle? (b) Evaluate the expression from part (a) in the limit $u \rightarrow 0$. (c) Explain whether the result agrees with what you should expect from nonrelativistic physics.

Section 39.9 The General Theory of Relativity

- 65. Review.** A global positioning system (GPS) satellite moves in a circular orbit with period 11 h 58 min. (a) Determine the radius of its orbit. (b) Determine its speed. (c) The nonmilitary GPS signal is broadcast at a frequency of 1 575.42 MHz in the reference frame of the satellite. When it is received on the Earth's surface by a GPS receiver (Fig. P39.65 on page 1230), what is

the fractional change in this frequency due to time dilation as described by special relativity? (d) The gravitational “blueshift” of the frequency according to general relativity is a separate effect. It is called a blueshift to indicate a change to a higher frequency. The magnitude of that fractional change is given by

$$\frac{\Delta f}{f} = \frac{\Delta U_g}{mc^2}$$

where U_g is the change in gravitational potential energy of an object–Earth system when the object of mass m is moved between the two points where the signal is observed. Calculate this fractional change in frequency due to the change in position of the satellite from the Earth’s surface to its orbital position. (e) What is the overall fractional change in frequency due to both time dilation and gravitational blueshift?



Figure P39.65

Additional Problems

66. An electron has a speed of $0.750c$. (a) Find the speed of a proton that has the same kinetic energy as the electron. (b) **What If?** Find the speed of a proton that has the same momentum as the electron.
67. The net nuclear fusion reaction inside the Sun can be written as $4^1\text{H} \rightarrow ^4\text{He} + E$. The rest energy of each hydrogen atom is 938.78 MeV, and the rest energy of the helium-4 atom is 3728.4 MeV. Calculate the percentage of the starting mass that is transformed to other forms of energy.
68. *Why is the following situation impossible?* On their 40th birthday, twins Speedo and Goslo say good-bye as Speedo takes off for a planet that is 50 ly away. He travels at a constant speed of $0.85c$ and immediately turns around and comes back to the Earth after arriving at the planet. Upon arriving back at the Earth, Speedo has a joyous reunion with Goslo.
69. A Doppler weather radar station broadcasts a pulse of radio waves at frequency 2.85 GHz. From a relatively small batch of raindrops at bearing 38.6° east of north, the station receives a reflected pulse after $180 \mu\text{s}$ with a frequency shifted upward by 254 Hz. From a similar batch of raindrops at bearing 39.6° east of north, the station receives a reflected pulse after the same time delay, with a frequency shifted downward by 254 Hz. These pulses have the highest and lowest frequencies the station receives. (a) Calculate the radial velocity components of both batches of raindrops. (b) Assume that these raindrops are swirling in a uniformly rotating vortex. Find the angular speed of their rotation.
70. An object having mass 900 kg and traveling at speed $0.850c$ collides with a stationary object having mass 1400 kg. The two objects stick together. Find (a) the speed and (b) the mass of the composite object.
71. An astronaut wishes to visit the Andromeda galaxy, making a one-way trip that will take 30.0 years in the spaceship’s frame of reference. Assume the galaxy is 2.00 million light-years away and his speed is constant. (a) How fast must he travel relative to Earth? (b) What will be the kinetic energy of his spacecraft, which has mass of 1.00×10^6 kg? (c) What is the cost of this energy if it is purchased at a typical consumer price for electric energy, 13.0¢ per kWh? The following approximation will prove useful:
- $$\frac{1}{\sqrt{1+x}} \approx 1 - \frac{x}{2} \text{ for } x \ll 1$$
72. A physics professor on the Earth gives an exam to her students, who are in a spacecraft traveling at speed v relative to the Earth. The moment the craft passes the professor, she signals the start of the exam. She wishes her students to have a time interval T_0 (spacecraft time) to complete the exam. Show that she should wait a time interval (Earth time) of
- $$T = T_0 \sqrt{\frac{1-v/c}{1+v/c}}$$
- before sending a light signal telling them to stop. (*Suggestion:* Remember that it takes some time for the second light signal to travel from the professor to the students.)
73. An interstellar space probe is launched from Earth. After a brief period of acceleration, it moves with a constant velocity, 70.0% of the speed of light. Its nuclear-powered batteries supply the energy to keep its data transmitter active continuously. The batteries have a lifetime of 15.0 years as measured in a rest frame. (a) How long do the batteries on the space probe last as measured by mission control on Earth? (b) How far is the probe from Earth when its batteries fail as measured by mission control? (c) How far is the probe from Earth as measured by its built-in trip odometer when its batteries fail? (d) For what total time after launch are data received from the probe by mission control? Note that radio waves travel at the speed of light and fill the space between the probe and Earth at the time the battery fails.
74. The equation
- $$K = \left(\frac{1}{\sqrt{1-u^2/c^2}} - 1 \right) mc^2$$
- gives the kinetic energy of a particle moving at speed u . (a) Solve the equation for u . (b) From the equation for u , identify the minimum possible value of speed and the corresponding kinetic energy. (c) Identify

- the maximum possible speed and the corresponding kinetic energy. (d) Differentiate the equation for u with respect to time to obtain an equation describing the acceleration of a particle as a function of its kinetic energy and the power input to the particle. (e) Observe that for a nonrelativistic particle we have $u = (2K/m)^{1/2}$ and that differentiating this equation with respect to time gives $a = P/(2mK)^{1/2}$. State the limiting form of the expression in part (d) at low energy. State how it compares with the nonrelativistic expression. (f) State the limiting form of the expression in part (d) at high energy. (g) Consider a particle with constant input power. Explain how the answer to part (f) helps account for the answer to part (c).
- 75.** Consider the astronaut planning the trip to Andromeda in Problem 71. (a) To three significant figures, what is the value for γ for the speed found in part (a) of Problem 71? (b) Just as the astronaut leaves on his constant-speed trip, a light beam is also sent in the direction of Andromeda. According to the Earth observer, how much later does the astronaut arrive at Andromeda after the arrival of the light beam?
- 76.** An object disintegrates into two fragments. One fragment has mass $1.00 \text{ MeV}/c^2$ and momentum $1.75 \text{ MeV}/c$ in the positive x direction, and the other has mass $1.50 \text{ MeV}/c^2$ and momentum $2.00 \text{ MeV}/c$ in the positive y direction. Find (a) the mass and (b) the speed of the original object.
- 77.** The cosmic rays of highest energy are protons that have kinetic energy on the order of 10^{13} MeV . (a) As measured in the proton's frame, what time interval would a proton of this energy require to travel across the Milky Way galaxy, which has a proper diameter $\sim 10^5 \text{ ly}$? (b) From the point of view of the proton, how many kilometers across is the galaxy?
- 78.** Spacecraft I, containing students taking a physics exam, approaches the Earth with a speed of $0.600c$ (relative to the Earth), while spacecraft II, containing professors proctoring the exam, moves at $0.280c$ (relative to the Earth) directly toward the students. If the professors stop the exam after 50.0 min have passed on their clock, for what time interval does the exam last as measured by (a) the students and (b) an observer on the Earth?
- 79. Review.** Around the core of a nuclear reactor shielded by a large pool of water, Cerenkov radiation appears as a blue glow. (See Fig. P17.38 on page 528.) Cerenkov radiation occurs when a particle travels faster through a medium than the speed of light in that medium. It is the electromagnetic equivalent of a bow wave or a sonic boom. An electron is traveling through water at a speed 10.0% faster than the speed of light in water. Determine the electron's (a) total energy, (b) kinetic energy, and (c) momentum. (d) Find the angle between the shock wave and the electron's direction of motion.
- 80.** The motion of a transparent medium influences the speed of light. This effect was first observed by Fizeau in 1851. Consider a light beam in water. The water moves with speed v in a horizontal pipe. Assume the light travels in the same direction as the water moves. The speed of light with respect to the water is c/n , where $n = 1.33$ is the index of refraction of water. (a) Use the velocity transformation equation to show that the speed of the light measured in the laboratory frame is
- $$u = \frac{c}{n} \left(\frac{1 + nv/c}{1 + v/nc} \right)$$
- (b) Show that for $v \ll c$, the expression from part (a) becomes, to a good approximation,
- $$u \approx \frac{c}{n} + v - \frac{v}{n^2}$$
- (c) Argue for or against the view that we should expect the result to be $u = (c/n) + v$ according to the Galilean transformation and that the presence of the term $-v/n^2$ represents a relativistic effect appearing even at "nonrelativistic" speeds. (d) Evaluate u in the limit as the speed of the water approaches c .
- 81.** Imagine that the entire Sun, of mass M_S , collapses to a sphere of radius R_g such that the work required to remove a small mass m from the surface would be equal to its rest energy mc^2 . This radius is called the *gravitational radius* for the Sun. (a) Use this approach to show that $R_g = GM_S/c^2$. (b) Find a numerical value for R_g .
- 82.** Why is the following situation impossible? An experimenter is accelerating electrons for use in probing a material. She finds that when she accelerates them through a potential difference of 84.0 kV, the electrons have half the speed she wishes. She quadruples the potential difference to 336 kV, and the electrons accelerated through this potential difference have her desired speed.
- 83.** An alien spaceship traveling at $0.600c$ toward the Earth launches a landing craft. The landing craft travels in the same direction with a speed of $0.800c$ relative to the mother ship. As measured on the Earth, the spaceship is 0.200 ly from the Earth when the landing craft is launched. (a) What speed do the Earth-based observers measure for the approaching landing craft? (b) What is the distance to the Earth at the moment of the landing craft's launch as measured by the aliens? (c) What travel time is required for the landing craft to reach the Earth as measured by the aliens on the mother ship? (d) If the landing craft has a mass of $4.00 \times 10^5 \text{ kg}$, what is its kinetic energy as measured in the Earth reference frame?
- 84.** (a) Prepare a graph of the relativistic kinetic energy and the classical kinetic energy, both as a function of speed, for an object with a mass of your choice. (b) At what speed does the classical kinetic energy underestimate the experimental value by 1%? (c) By 5%? (d) By 50%?
- 85.** An observer in a coasting spacecraft moves toward a mirror at speed $v = 0.650c$ relative to the reference frame labeled S in Figure P39.85 (page 1232). The mirror is stationary with respect to S. A light pulse emitted by the spacecraft travels toward the mirror and is

reflected back to the spacecraft. The spacecraft is a distance $d = 5.66 \times 10^{10}$ m from the mirror (as measured by observers in S) at the moment the light pulse leaves the spacecraft. What is the total travel time of the pulse as measured by observers in (a) the S frame and (b) the spacecraft?

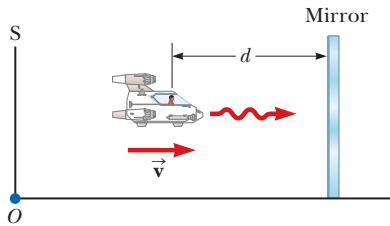


Figure P39.85 Problems 85 and 86.

86. An observer in a coasting spacecraft moves toward a mirror at speed v relative to the reference frame labeled S in Figure P39.85. The mirror is stationary with respect to S. A light pulse emitted by the spacecraft travels toward the mirror and is reflected back to the spacecraft. The spacecraft is a distance d from the mirror (as measured by observers in S) at the moment the light pulse leaves the spacecraft. What is the total travel time of the pulse as measured by observers in (a) the S frame and (b) the spacecraft?
87. A ^{57}Fe nucleus at rest emits a 14.0-keV photon. Use conservation of energy and momentum to find the kinetic energy of the recoiling nucleus in electron volts. Use $Mc^2 = 8.60 \times 10^{-9}$ J for the final state of the ^{57}Fe nucleus.

Challenge Problems

88. A particle with electric charge q moves along a straight line in a uniform electric field \vec{E} with speed u . The electric force exerted on the charge is $q\vec{E}$. The velocity of the particle and the electric field are both in the x direction. (a) Show that the acceleration of the particle in the x direction is given by

$$a = \frac{du}{dt} = \frac{qE}{m} \left(1 - \frac{u^2}{c^2}\right)^{3/2}$$

(b) Discuss the significance of the dependence of the acceleration on the speed. (c) **What If?** If the particle starts from rest at $x = 0$ at $t = 0$, how would you proceed to find the speed of the particle and its position at time t ?

89. The creation and study of new and very massive elementary particles is an important part of contemporary physics. To create a particle of mass M requires an energy Mc^2 . With enough energy, an exotic particle can be created by allowing a fast-moving proton to collide with a similar target particle. Consider a perfectly inelastic collision between two protons: an incident proton with mass m_p , kinetic energy K , and momentum magnitude p joins with an originally stationary target proton to form a single product particle of mass M . Not all the kinetic energy of the incoming proton is available to create the product particle because conservation of

momentum requires that the system as a whole still must have some kinetic energy after the collision. Therefore, only a fraction of the energy of the incident particle is available to create a new particle. (a) Show that the energy available to create a product particle is given by

$$Mc^2 = 2m_p c^2 \sqrt{1 + \frac{K}{2m_p c^2}}$$

This result shows that when the kinetic energy K of the incident proton is large compared with its rest energy $m_p c^2$, then M approaches $(2m_p K)^{1/2}/c$. Therefore, if the energy of the incoming proton is increased by a factor of 9, the mass you can create increases only by a factor of 3, not by a factor of 9 as would be expected. (b) This problem can be alleviated by using *colliding beams* as is the case in most modern accelerators. Here the total momentum of a pair of interacting particles can be zero. The center of mass can be at rest after the collision, so, in principle, all the initial kinetic energy can be used for particle creation. Show that

$$Mc^2 = 2mc^2 \left(1 + \frac{K}{mc^2}\right)$$

where K is the kinetic energy of each of the two identical colliding particles. Here, if $K \gg mc^2$, we have M directly proportional to K as we would desire.

90. Suppose our Sun is about to explode. In an effort to escape, we depart in a spacecraft at $v = 0.800c$ and head toward the star Tau Ceti, 12.0 ly away. When we reach the midpoint of our journey from the Earth, we see our Sun explode, and, unfortunately, at the same instant, we see Tau Ceti explode as well. (a) In the spacecraft's frame of reference, should we conclude that the two explosions occurred simultaneously? If not, which occurred first? (b) **What If?** In a frame of reference in which the Sun and Tau Ceti are at rest, did they explode simultaneously? If not, which exploded first?
91. Owen and Dina are at rest in frame S' , which is moving at $0.600c$ with respect to frame S. They play a game of catch while Ed, at rest in frame S, watches the action (Fig. P39.91). Owen throws the ball to Dina at $0.800c$ (according to Owen), and their separation (measured in S') is equal to 1.80×10^{12} m. (a) According to Dina, how fast is the ball moving? (b) According to Dina, what time interval is required for the ball to reach her? According to Ed, (c) how far apart are Owen and Dina, (d) how fast is the ball moving, and (e) what time interval is required for the ball to reach Dina?

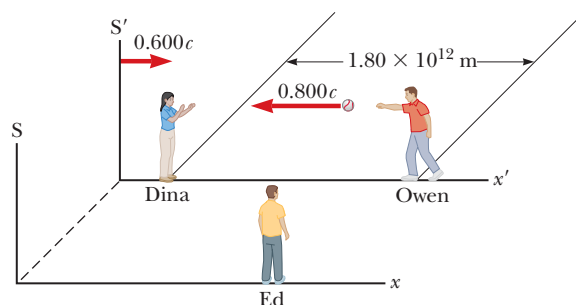


Figure P39.91